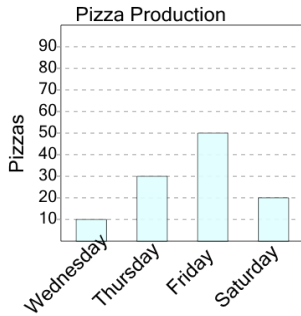




Graphing - Bar Graph (Single) - Read Category

1

On what day were 20 pizzas made?



A

Wednesday

B

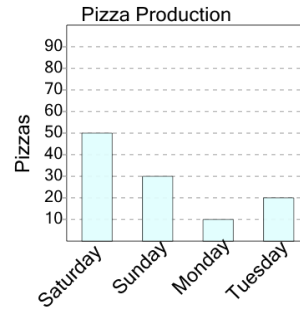
Saturday

C

Friday

2

On what day were 20 pizzas made?



A

Sunday

B

Monday

C

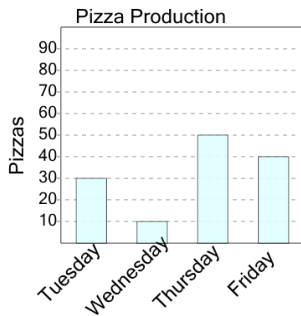
Tuesday

D

Saturday

3

On what day were 40 pizzas made?



A

Tuesday

B

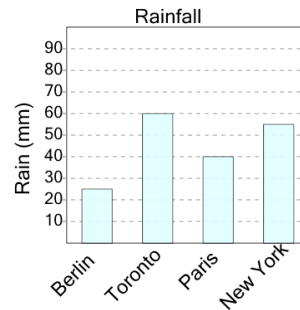
Friday

C

Thursday

4

What city had 40 millimeters of rain?



A

Berlin

B

New York

C

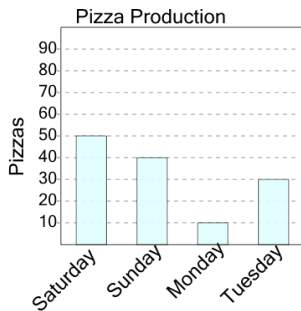
Toronto

D

Paris

5

On what day were 50 pizzas made?



A

Saturday

B

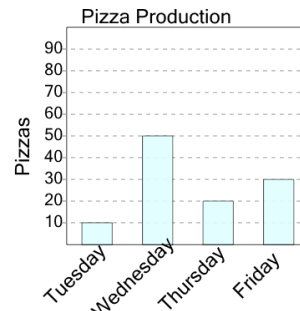
Tuesday

C

Sunday

6

On what day were 30 pizzas made?



A

Friday

B

Thursday

C

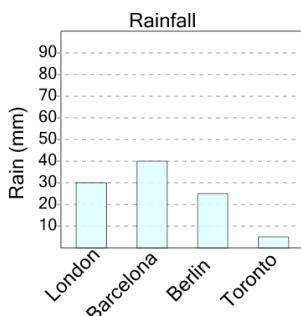
Wednesday

D

Tuesday

7

What city had 30 millimeters of rain?



A

Toronto

B

Barcelona

C

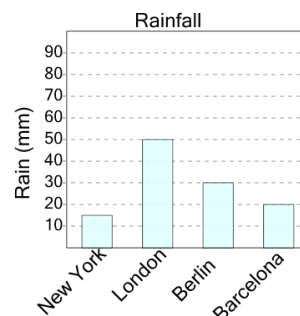
London

D

Berlin

8

What city had 15 millimeters of rain?



A

New York

B

Barcelona

C

Berlin