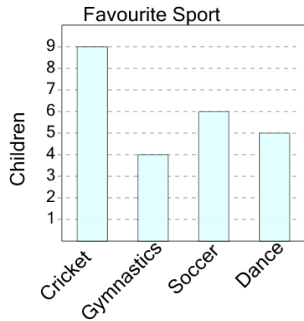


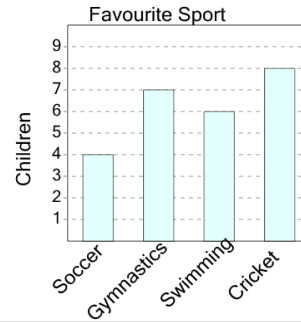
## Graphing - Bar Graph (Single) - Read Value

**1** How many kids like soccer as a sport?



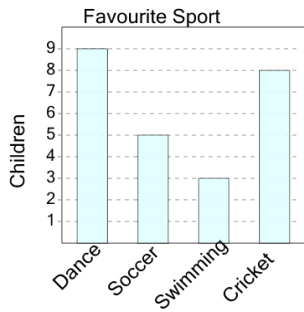
A	B	C
4	5	0
D	E	F
6	2	10

**2** How many kids like soccer as a sport?



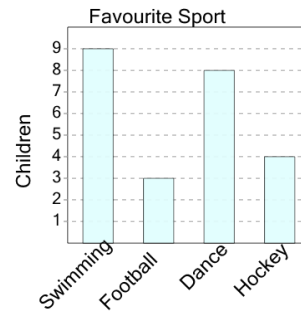
A	B	C
8	0	4
D	E	F
2	10	7

**3** How many kids like dance as a sport?



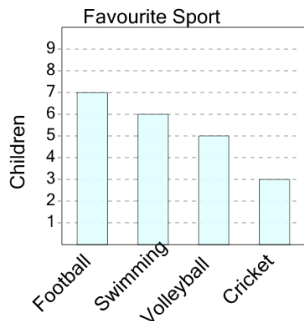
A	B	C
12	7	2
D	E	F
15	16	9

**4** How many kids like dance as a sport?



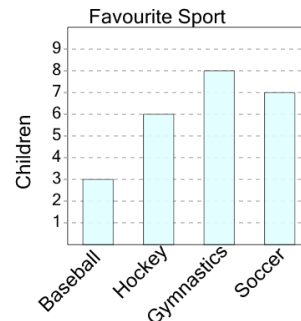
A	B	C
2	14	9
D	E	F
7	8	

**5** How many kids like football as a sport?



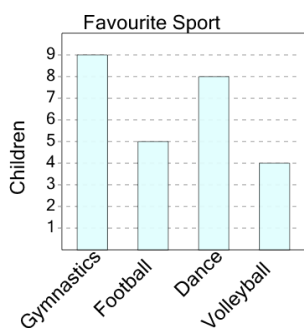
A	B	C
7	13	8
D	E	F
5	11	12

**6** How many kids like hockey as a sport?



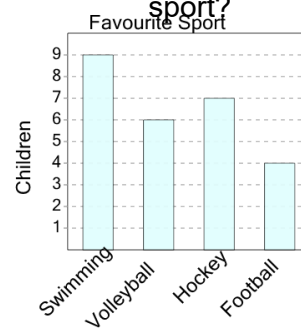
A	B	C
6	13	2
D	E	F
4	10	8

**7** How many kids like volleyball as a sport?



A	B	C
3	1	8
D	E	F
0	4	5

**8** How many kids like swimming as a sport?



A	B	C
8	9	7
D	E	F
3	2	13