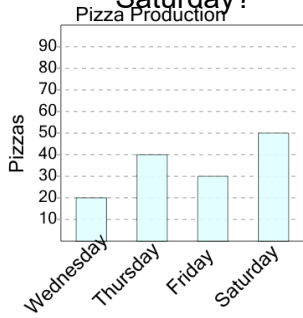


## Graphing - Bar Graph (Single) - Read Value

1

How many pizzas were made on Saturday?



A

50

B

120

C

70

D

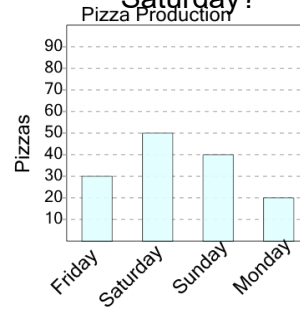
90

E

100

2

How many pizzas were made on Saturday?



A

90

B

120

C

100

D

50

E

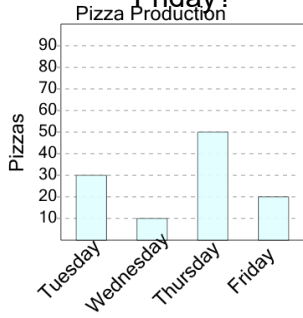
10

F

40

3

How many pizzas were made on Friday?



A

70

B

10

C

20

D

40

E

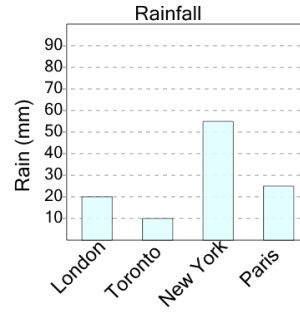
60

F

50

4

How many millimeters of rain were there in New York?



A

35

B

85

C

55

D

80

E

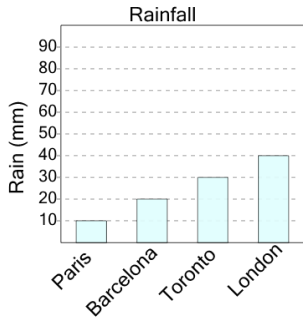
90

F

30

5

How many millimeters of rain were there in Toronto?



A

30

B

25

C

15

D

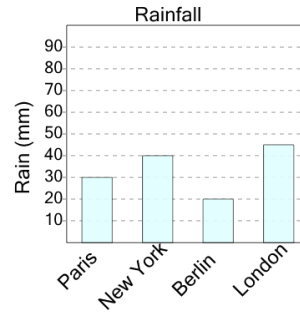
10

E

55

6

How many millimeters of rain were there in Berlin?



A

20

B

15

C

45

D

5

E

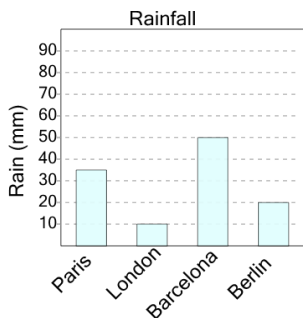
50

F

35

7

How many millimeters of rain were there in Barcelona?



A

55

B

15

C

35

D

30

E

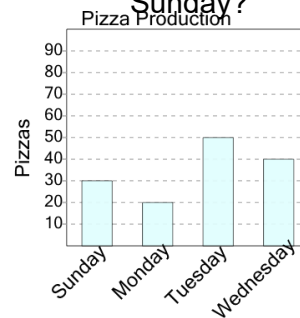
50

F

45

8

How many pizzas were made on Sunday?



A

30

B

50

C

40

D

20

E

90