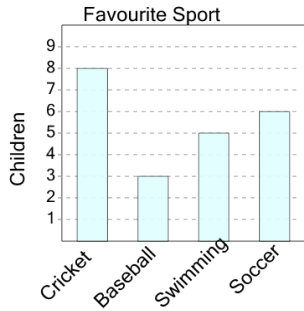


## Graphing - Bar Graph (Single) - Sum of Two

**1**

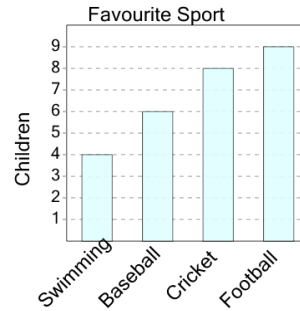
How many kids like either soccer or baseball as a sport?



A	B	C
7	15	2
D	E	F
14	1	9

**2**

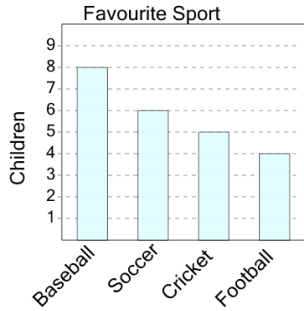
How many kids like either baseball or swimming as a sport?



A	B	C
4	2	8
D	E	F
10	3	15

**3**

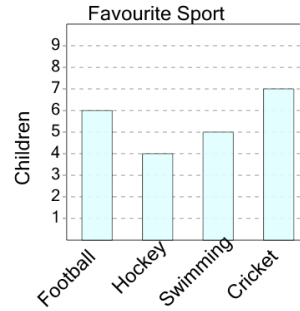
How many kids like either cricket or football as a sport?



A	B	C
4	9	12
D	E	F
1	14	15

**4**

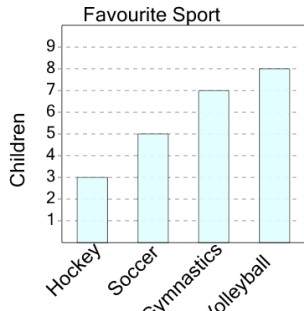
How many kids like either cricket or hockey as a sport?



A	B	C
6	11	8
D	E	F
18	16	13

**5**

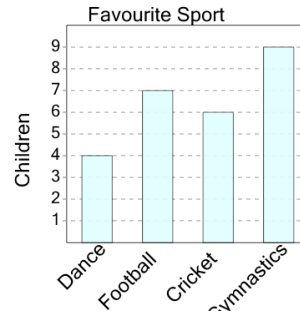
How many kids like either gymnastics or soccer as a sport?



A	B	C
12	16	15
D	E	F
5	9	14

**6**

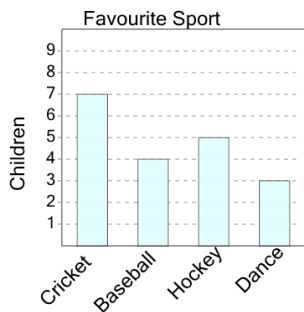
How many kids like either football or cricket as a sport?



A	B	C
5	17	20
D	E	F
16	13	7

**7**

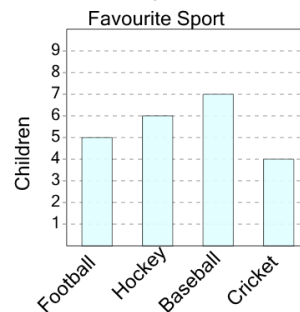
How many kids like either cricket or dance as a sport?



A	B	C
5	17	15
D	E	F
14	10	16

**8**

How many kids like either baseball or hockey as a sport?



A	B	C
13	10	19
D	E	F
17	16	8