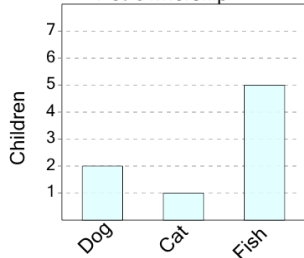


Graphing - Bar Graph (Single) - Total of Series

1

How many total children were surveyed?

Pet Ownership



A

15

B

10

C

3

D

5

E

8

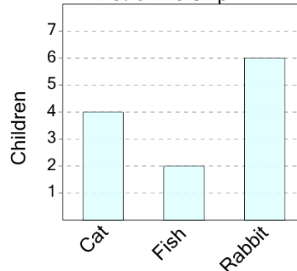
F

0

2

How many total children were surveyed?

Pet Ownership



A

8

B

14

C

12

D

4

E

7

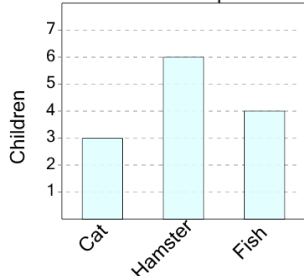
F

5

3

How many total children were surveyed?

Pet Ownership



A

19

B

17

C

13

D

8

E

18

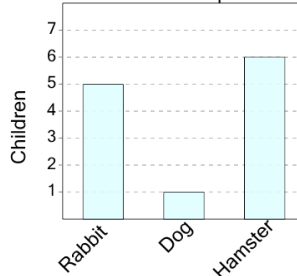
F

5

4

How many total children were surveyed?

Pet Ownership



A

6

B

18

C

5

D

12

E

19

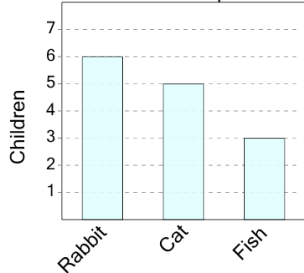
F

10

5

How many total children were surveyed?

Pet Ownership



A

14

B

9

C

20

D

17

E

16

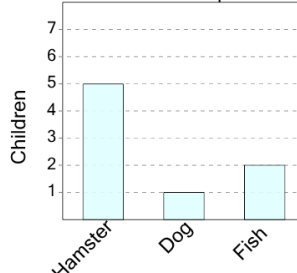
F

18

6

How many total children were surveyed?

Pet Ownership



A

2

B

8

C

15

D

4

E

5

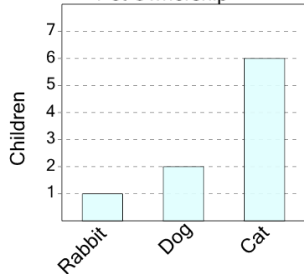
F

3

7

How many total children were surveyed?

Pet Ownership



A

9

B

5

C

16

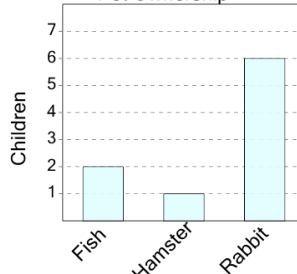
D

12

8

How many total children were surveyed?

Pet Ownership



A

3

B

9

C

1

D

6

E

13