


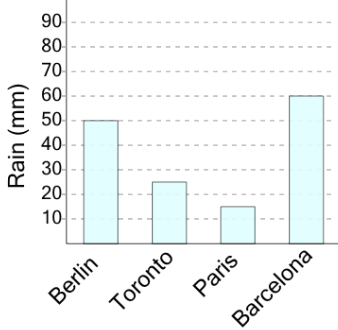


## Graphing - Bar Graph (Single) - Which is More



1

Rainfall



Did more rain fall in Barcelona or in Berlin?

A

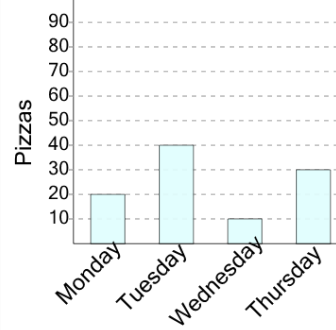
Barcelona

B

Berlin

2

Pizza Production



Were more pizzas made on Thursday or on Tuesday?

A

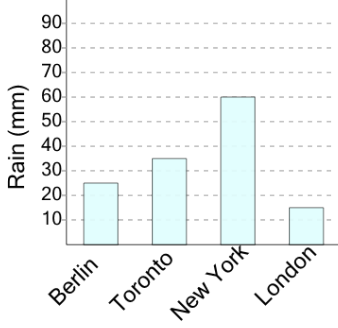
Tuesday

B

Thursday

3

Rainfall



Did more rain fall in Toronto or in London?

A

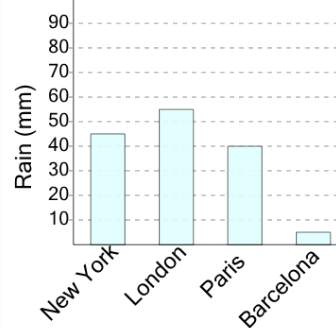
Toronto

B

London

4

Rainfall



Did more rain fall in London or in Barcelona?

A

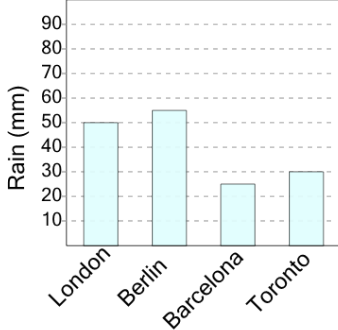
London

B

Barcelona

5

Rainfall



Did more rain fall in Toronto or in London?

A

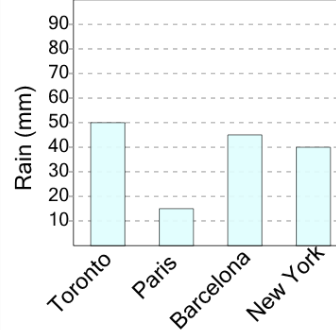
London

B

Toronto

6

Rainfall



Did more rain fall in Paris or in New York?

A

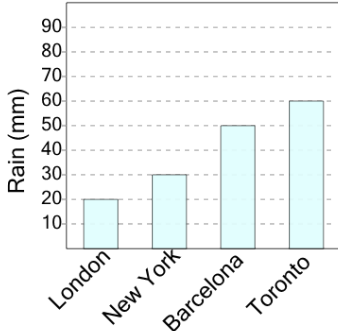
Paris

B

New York

7

Rainfall



Did more rain fall in New York or in Toronto?

A

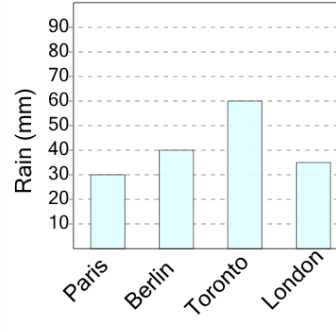
Toronto

B

New York

8

Rainfall



Did more rain fall in Berlin or in London?

A

Berlin

B

London