

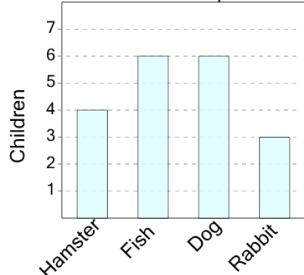


## Graphing - Bar Graph (Single) - Which Two are Same

1

What two pets are owned by the same number of kids?

Pet Ownership



A

Fish and Dog

B

Dog and Hamster

C

Fish and Rabbit

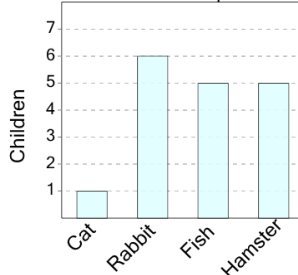
D

Hamster and Dog

2

What two pets are owned by the same number of kids?

Pet Ownership



A

Fish and Hamster

B

Fish and Cat

C

Rabbit and Cat

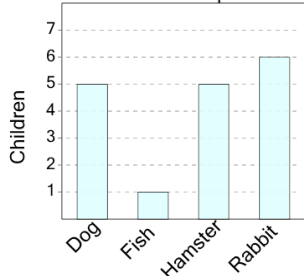
D

Rabbit and Fish

3

What two pets are owned by the same number of kids?

Pet Ownership



A

Rabbit and Dog

B

Dog and Rabbit

C

Rabbit and Hamster

D

Dog and Hamster

E

Hamster and Fish

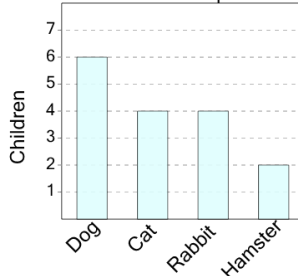
F

Fish and Dog

4

What two pets are owned by the same number of kids?

Pet Ownership



A

Cat and Rabbit

B

Cat and Hamster

C

Rabbit and Dog

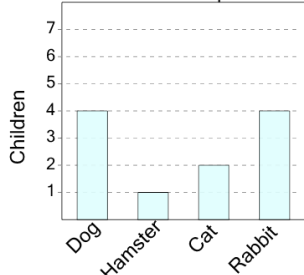
D

Hamster and Rabbit

5

What two pets are owned by the same number of kids?

Pet Ownership



A

Cat and Dog

B

Dog and Cat

C

Cat and Rabbit

D

Rabbit and Hamster

E

Dog and Rabbit

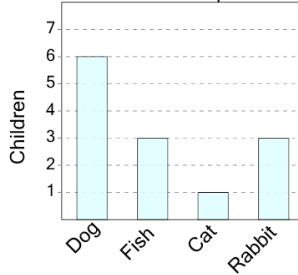
F

Hamster and Cat

6

What two pets are owned by the same number of kids?

Pet Ownership



A

Dog and Cat

B

Fish and Rabbit

C

Rabbit and Cat

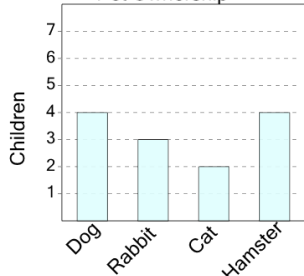
D

Cat and Fish

7

What two pets are owned by the same number of kids?

Pet Ownership



A

Cat and Hamster

B

Cat and Dog

C

Dog and Hamster

D

Cat and Rabbit

E

Hamster and Cat

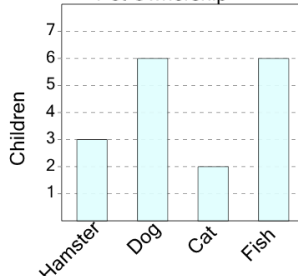
F

Dog and Cat

8

What two pets are owned by the same number of kids?

Pet Ownership



A

Dog and Fish

B

Fish and Cat

C

Cat and Hamster

D

Hamster and Dog