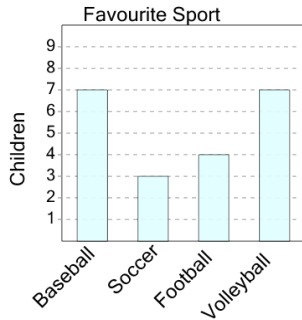


Graphing - Bar Graph (Single) - Which Two are Same

1

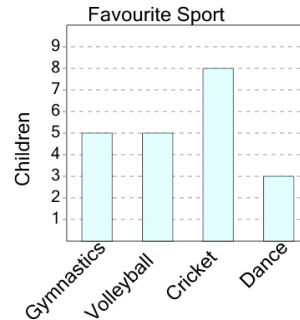
Which two sports are liked by the same number of kids?



- A Baseball and Football
- B Football and Volleyball
- C Baseball and Volleyball
- D Volleyball and Football

2

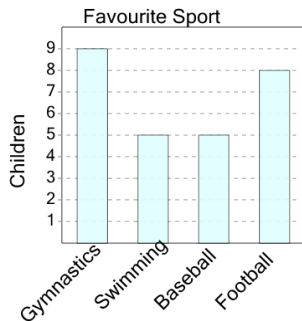
Which two sports are liked by the same number of kids?



- A Gymnastics and Cricket
- B Dance and Cricket
- C Gymnastics and Dance
- D Cricket and Volleyball
- E Gymnastics and Volleyball

3

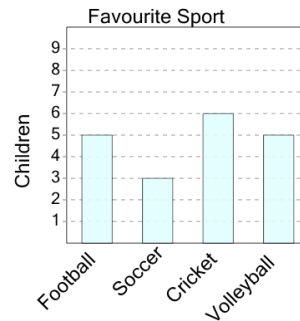
Which two sports are liked by the same number of kids?



- A Football and Baseball
- B Gymnastics and Football
- C Football and Swimming
- D Swimming and Baseball
- E Swimming and Football

4

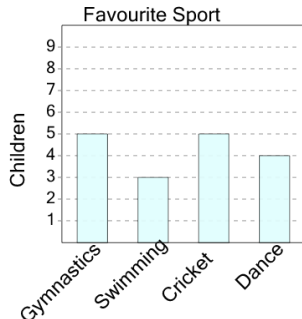
Which two sports are liked by the same number of kids?



- A Volleyball and Soccer
- B Soccer and Volleyball
- C Football and Volleyball
- D Football and Cricket
- E Cricket and Soccer

5

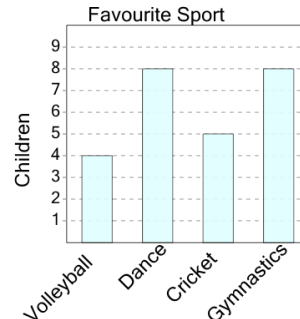
Which two sports are liked by the same number of kids?



- A Gymnastics and Cricket
- B Gymnastics and Swimming
- C Swimming and Gymnastics

6

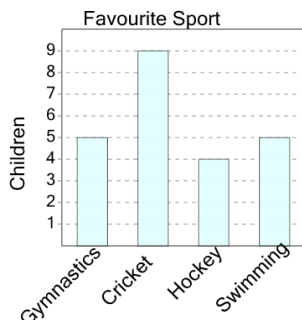
Which two sports are liked by the same number of kids?



- A Dance and Gymnastics
- B Volleyball and Cricket
- C Dance and Cricket
- D Volleyball and Dance
- E Gymnastics and Cricket

7

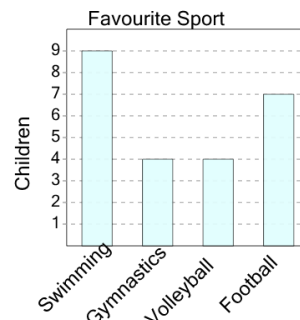
Which two sports are liked by the same number of kids?



- A Hockey and Cricket
- B Gymnastics and Swimming
- C Hockey and Swimming
- D Swimming and Hockey
- E Gymnastics and Hockey
- F Cricket and Gymnastics

8

Which two sports are liked by the same number of kids?



- A Football and Gymnastics
- B Volleyball and Football
- C Gymnastics and Volleyball
- D Gymnastics and Swimming
- E Swimming and Football
- F Football and Swimming