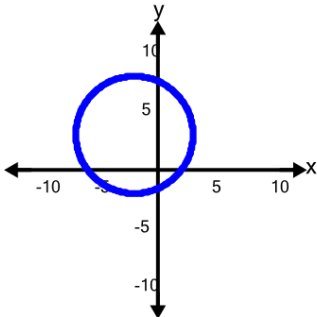




Graphing Circles - Graph to Radius



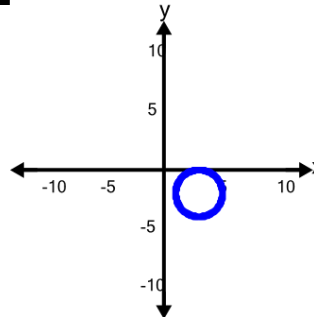
1



Which radius is correct for this graph?

A	B
$r = 2$	$r = 5$

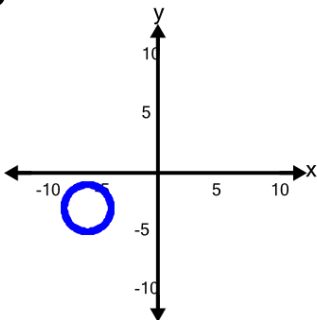
2



Which radius is correct for this graph?

A	B
$r = 6$	$r = 2$

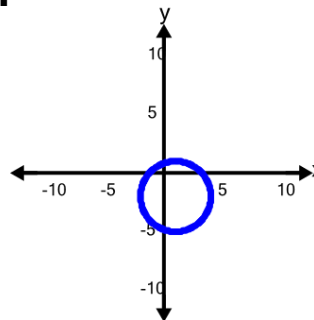
3



Which radius is correct for this graph?

A	B
$r = 2$	$r = 6$

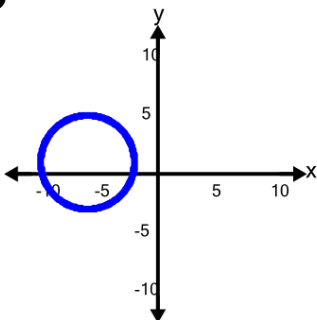
4



Which radius is correct for this graph?

A	B
$r = 7$	$r = 3$

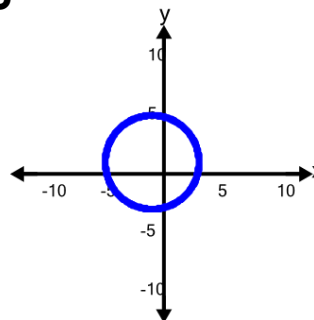
5



Which radius is correct for this graph?

A	B
$r = 7$	$r = 4$

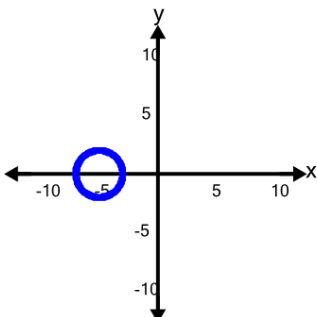
6



Which radius is correct for this graph?

A	B
$r = 7$	$r = 4$

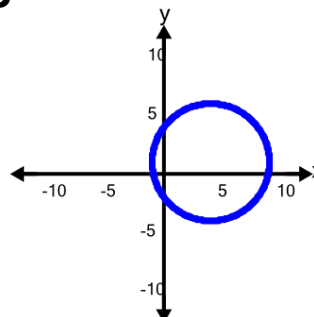
7



Which radius is correct for this graph?

A	B
$r = 2$	$r = 6$

8



Which radius is correct for this graph?

A	B
$r = 1$	$r = 5$