
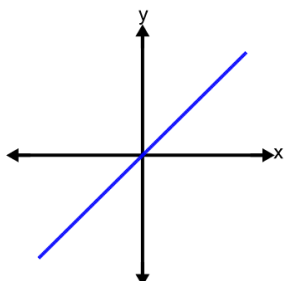




Graphing - Function Graphs - Graph to Major Type

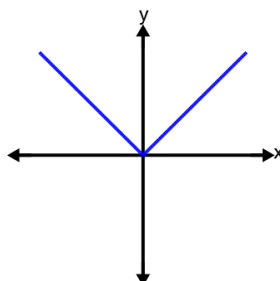


1 What type of graph is this?



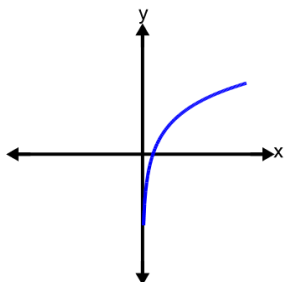
- A Absolute Value
- B Quadratic
- C Trigonometric
- D Linear

2 What type of graph is this?



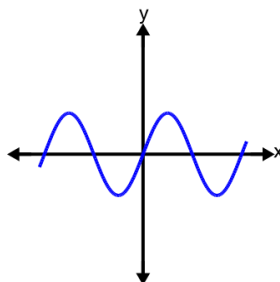
- A Absolute Value
- B Exponential
- C Quadratic
- D Linear

3 What type of graph is this?



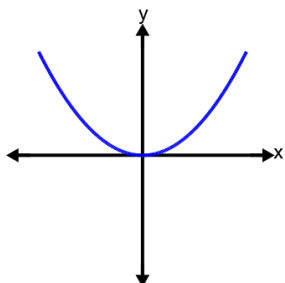
- A Trigonometric
- B Cubic
- C Logarithmic
- D Reciprocal

4 What type of graph is this?



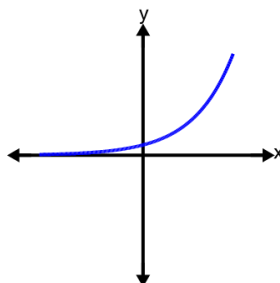
- A Trigonometric
- B Reciprocal
- C Cubic
- D Exponential

5 What type of graph is this?



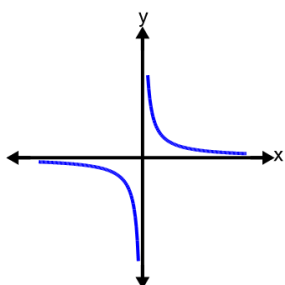
- A Quadratic
- B Absolute Value
- C Linear
- D Trigonometric

6 What type of graph is this?



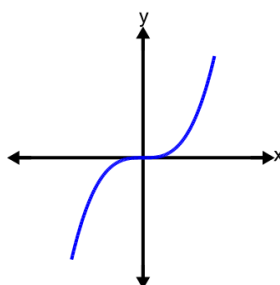
- A Exponential
- B Trigonometric
- C Cubic
- D Reciprocal

7 What type of graph is this?



- A Exponential
- B Linear
- C Reciprocal
- D Absolute Value

8 What type of graph is this?



- | | |
|---------------|--------------|
| A Logarithmic | B Cubic |
| C Exponential | D Reciprocal |
| | |