




## Graphing - Pictogram (Ones) - Average of Series



**1**


What is the average number of icecreams eaten per kid?



A	B	C
0	8	3
D	E	F
4	9	5

**2**

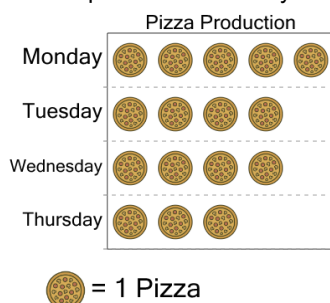
What is the average number of icecreams eaten per kid?



A	B	C
5	2	1
D	E	F
0	4	8

**3**

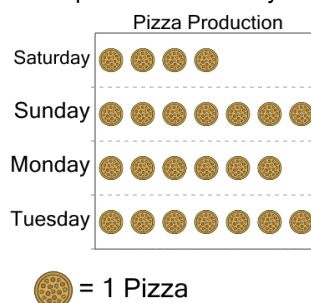
What is the average number of pizzas produced each day?



A	B	C
46	4	34
D	E	F
24	54	56

**4**

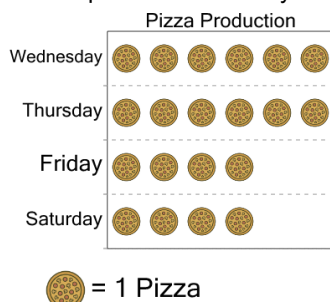
What is the average number of pizzas produced each day?



A	B	C
14	56	6
D	E	F
36	54	46

**5**

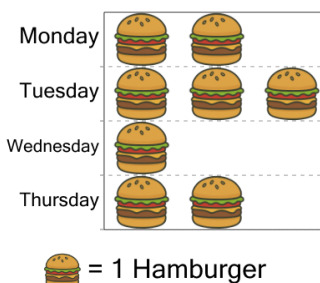
What is the average number of pizzas produced each day?



A	B	C
25	15	5
D	E	F
35	75	65

**6**

What is the average number of hamburgers sold per day?



A	B	C
2	3	6
D	E	F
1	0	

**7**

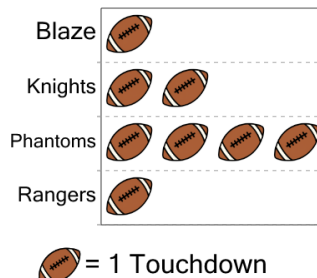
What is the average number of free throws made per player?



A	B	C
3	12	6
D	E	F
1	2	5

**8**

What is the average number of touchdowns made per team?



A	B	C
6	2	0
D	E	F
9	5	8