





Graphing - Pictogram (Ones) - Difference of Two



1

How many more free throws did Mia make than Carter?



A	B	C
12	10	2
D	E	F
13	6	3

2


How many more touchdowns did Storm make than Wizards?



A	B	C
5	2	8
D	E	
3	4	

3

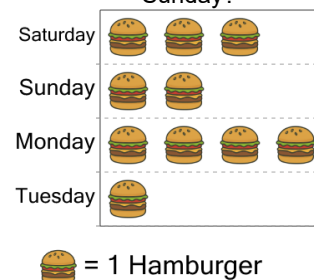
How many more icecreams did Carter eat than Alyssa?



A	B	C
2	4	3
D	E	
8	5	

4


How many more hamburgers were sold on Saturday than on Sunday?



A	B	C
3	7	0
D	E	F
1	2	5

5


How many more hamburgers were sold on Saturday than on Sunday?



A	B	C
5	2	7
D	E	F
6	4	3

6

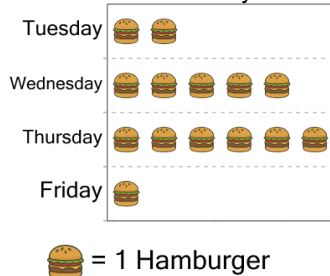
How many more icecreams did Mia eat than Roan?



A	B	C
1	6	2
D	E	F
3	8	7

7


How many more hamburgers were sold on Thursday than on Wednesday?



A	B	C
1	3	5
D	E	
7	0	

8

How many more hamburgers were sold on Saturday than on Friday?



A	B	C
1	3	9
D	E	
8	4	