


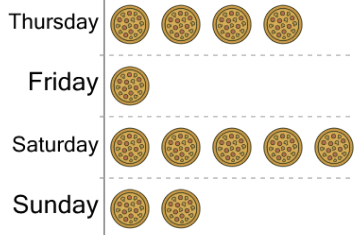


Graphing - Pictogram (Ones) - Which is More



1

Pizza Production




Were more pizzas made on Saturday or on Sunday?

A


B

Sunday

Saturday

 = 1 Pizza

2




Did Maya or Mia eat more icecreams?

A

B

Maya

Mia

 = 1 Icecream

3



Were more hamburgers were sold on Wednesday than on Sunday?

A


B

Sunday

Wednesday

 = 1 Hamburger

4



Did Maya or Evan eat more icecreams?

A


B

Maya

Evan

 = 1 Icecream

5



Did Evan or Carter make more free throws?

A


B

Evan

Carter

 = 1 Free Throw

6



Did Storm or Phantoms make more touchdowns?

A


B

Phantoms

Storm

 = 1 Touchdown

7




Did Evan or Harper eat more icecreams?

A

B

Evan

Harper

 = 1 Icecream

8




Were more hamburgers were sold on Sunday than on Thursday?

A

B

Thursday

Sunday

 = 1 Hamburger