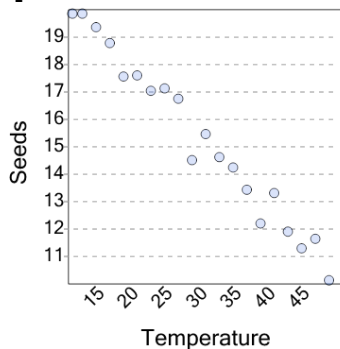


Graphing - Scatter Plot (Linear) - Graph to Prediction Given Y

1

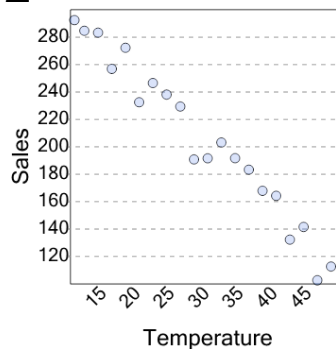
If seeds is 13.5, what would a reasonable value of temperature be?

A

20

B

36

2

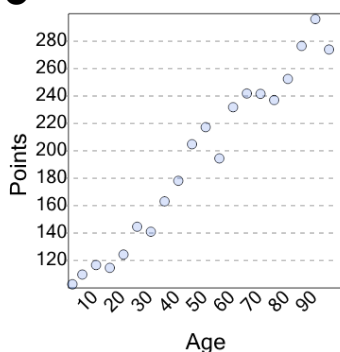
If sales is 170, what would a reasonable value of temperature be?

A

16

B

36

3

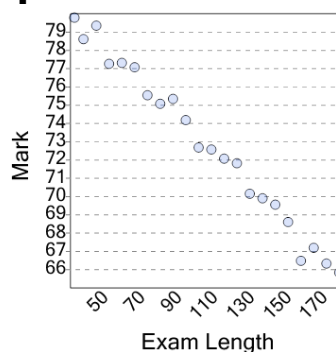
If points is 200, what would a reasonable value of age be?

A

50

B

10

4

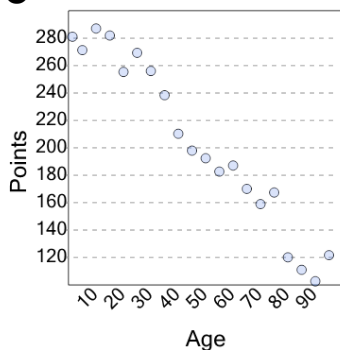
If mark is 70.25, what would a reasonable value of exam length be?

A

128

B

38

5

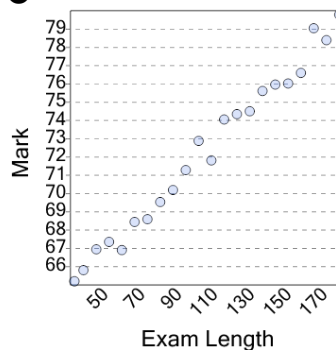
If points is 230, what would a reasonable value of age be?

A

75

B

35

6

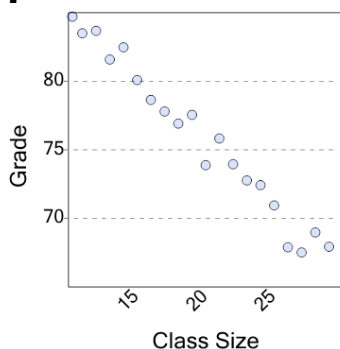
If mark is 68, what would a reasonable value of exam length be?

A

165

B

60

7

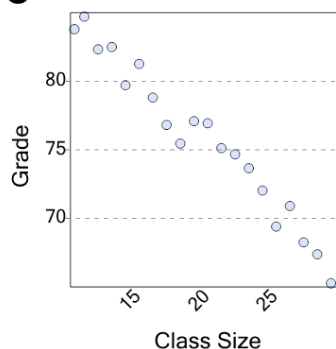
If grade is 75, what would a reasonable value of class size be?

A

12

B

20

8

If grade is 72, what would a reasonable value of class size be?

A

11

B

23