



Graphing - Tally Chart - Average of Series



1 What is the average number of kids who own one of these types of pets?



A	B	C
8	14	1
D	E	F
5	13	11

2 What is the average number of kids who like each fruit?



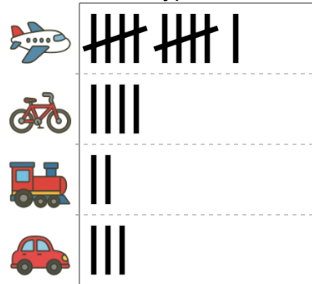
A	B	C
10	16	2
D	E	F
14	15	9

3 What is the average number of kids who like each fruit?



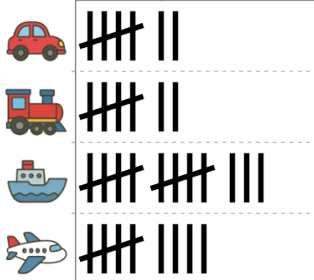
A	B	C
7	11	1
D	E	F
2	10	14

4 What is the average number of kids who like each transportation type?



A	B	C
5	4	3
D	E	F
10	1	12

5 What is the average number of kids who like each transportation type?



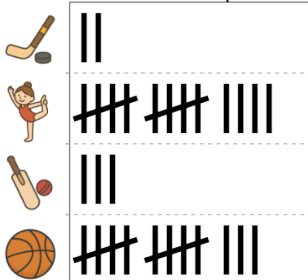
A	B	C
9	10	5
D	E	F
11	14	

6 What is the average number of kids who own one of these types of pets?




A	B	C
11	17	8
D	E	F
7	6	10

7 What is the average number of kids who like each sport?



A	B	C
5	4	11
D	E	F
6	8	9

8 What is the average number of kids who own one of these types of pets?



A	B	C
8	13	2
D	E	F
1	6	9