




Graphing - Tally Chart - Minimum



1

What pet do the SMALLEST number of children have?


Pet Ownership



A	B	C
Cat	Bird	Fish
D		
Dog		

2

What fruit do the SMALLEST number of children like?



A	B
Cherry	Banana
C	D
Apple	Orange

3

What pet do the SMALLEST number of children have?


Pet Ownership



A	B
Cat	Lizard
C	D
Dog	Bird

4


What fruit do the SMALLEST number of children like?



A	B
Cherry	Lemon
C	D
Apple	Watermelon

5

What fruit do the SMALLEST number of children like?




A	B
Watermelon	Apple
C	D
Lemon	Orange

6

What sport do the SMALLEST number of children like?


Favourite Sport



A	B
Dance	Cricket
C	
Football	

7


What fruit do the SMALLEST number of children like?



A	B
Watermelon	Apple
C	D
Pear	Orange

8

What treat do the SMALLEST number of children like?



A	B
Cake	Candy
C	D
Ice Cream	Lollipop