




































Graphing - Tally Chart - Read Category



<p>1 What pet do 6 children have?</p> <p>Pet Ownership</p>     <p>Tally marks for each pet: Cat (6), Lizard (1), Dog (5), Parrot (3)</p>	<p>A Lizard</p> <p>C Cat</p>	<p>B Dog</p> <p>D Bird</p>	<p>2 What sport do 11 children like?</p> <p>Favourite Sport</p>     <p>Tally marks for each sport: Basketball (5), Baseball (5), Cricket (3), Soccer (4)</p>	<p>A Baseball</p> <p>C Cricket</p>	<p>B Soccer</p> <p>D Basketball</p>
<p>3 What food do 11 children like?</p>     <p>Tally marks for each food: Chicken (4), Cake (5), Salad (3), Fries (2)</p>	<p>A Chicken</p> <p>C Cake</p>	<p>B Fries</p> <p>D Salad</p>	<p>4 What fruit do 5 children like?</p>     <p>Tally marks for each fruit: Lemon (2), Cherry (3), Orange (3), Apple (4)</p>	<p>A Lemon</p> <p>C Orange</p>	<p>B Apple</p> <p>D Cherry</p>
<p>5 What sport do 9 children like?</p> <p>Favourite Sport</p>     <p>Tally marks for each sport: Gymnastics (4), Hockey (4), Cricket (3), Soccer (4)</p>	<p>A Hockey</p> <p>C Gymnastics</p>	<p>B Dance</p>	<p>6 What treat do 2 children like?</p>     <p>Tally marks for each treat: Ice cream (4), Cake (2), Lollipop (3), Candy (3)</p>	<p>A Cake</p> <p>C Ice Cream</p>	<p>B Candy</p> <p>D Lollipop</p>
<p>7 What sport do 9 children like?</p> <p>Favourite Sport</p>     <p>Tally marks for each sport: Cricket (5), Hockey (3), Soccer (4), Gymnastics (4)</p>	<p>A Gymnastics</p> <p>C Hockey</p>	<p>B Cricket</p> <p>D Volleyball</p>	<p>8 What sport do 6 children like?</p> <p>Favourite Sport</p>     <p>Tally marks for each sport: Cricket (3), Soccer (4), Volleyball (4), Hockey (3)</p>	<p>A Soccer</p> <p>C Volleyball</p>	<p>B Hockey</p> <p>D Dance</p>