





Decimal Concept Comparison - Picture Hundredths vs Fraction Tenths



1 Choose the correct equality operator

$$\frac{5}{10}$$



A

<

B


=

C

>

2 Choose the correct equality operator

$$\frac{11}{10}$$



A

<


B

=

C

>

3 Choose the correct equality operator



$$\frac{3}{10}$$

A

<


B

=

C

>

4 Choose the correct equality operator



$$\frac{8}{10}$$

A

<


B

=

C

>

5 Choose the correct equality operator



$$\frac{6}{10}$$

A

<


B

=

C

>

6 Choose the correct equality operator



$$\frac{7}{10}$$

A

<

B


=

C

>

7 Choose the correct equality operator

$$\frac{5}{10}$$



A

<

B


=

C

>

8 Choose the correct equality operator

$$\frac{6}{10}$$



A

<

B

=

C

>