





Decimal Concept Comparison - Picture Tenths vs Decimal Number Hundredths



1 Choose the correct equality operator



○ 0.32

A

<

B

=

C

>

2 Choose the correct equality operator

0.62 ○



A

<

B

=

C

>

3 Choose the correct equality operator

0.8 ○



A

<

B

=

C

>

4 Choose the correct equality operator

0.88 ○



A

<


B

=

C

>

5 Choose the correct equality operator



○ 0.46

A

<

B

=

C

>

6 Choose the correct equality operator



○ 0.05

A

<

B

=

C

>

7 Choose the correct equality operator



○ 0.13

A

<

B

=

C

>

8 Choose the correct equality operator

0.68 ○



A

<

B

=

C

>