
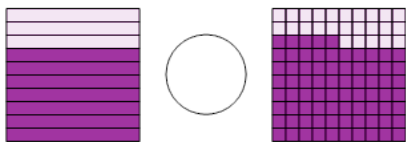




Decimal Concept Comparison - Picture Tenths vs Picture Hundredths



1 Choose the correct equality operator



A

<

B

=

C

>

2 Choose the correct equality operator



A

<

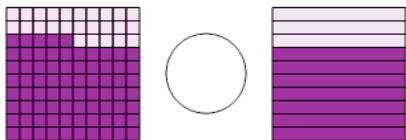
B

=

C

>

3 Choose the correct equality operator



A

<

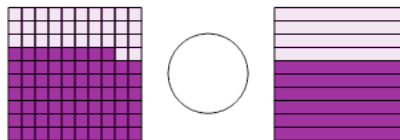
B

=

C

>

4 Choose the correct equality operator



A

<

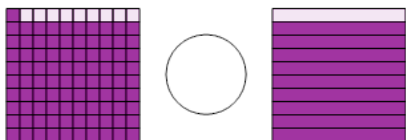
B

=

C

>

5 Choose the correct equality operator



A

<

B

=

C

>

6 Choose the correct equality operator



A

<

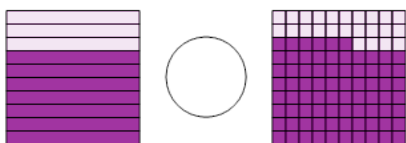
B

=

C

>

7 Choose the correct equality operator



A

<

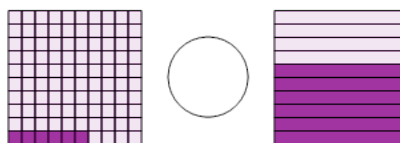
B

=

C

>

8 Choose the correct equality operator



A

<

B

=

C

>