






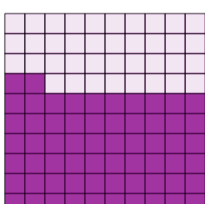


Decimal Concept Image - Picture and Fraction (10s) to Decimal - Hundredths

1 89 out of 100 are shaded. What decimal number is that?  89/100	A 0.89	B 0.12	C 0.71	2 38 out of 100 are shaded. What decimal number is that?  38/100	A 0.93	B 0.22	C 0.92
	D 0.39				D 0.38		
3 86 out of 100 are shaded. What decimal number is that?  86/100	A 0.83	B 0.62	C 0.86	4 29 out of 100 are shaded. What decimal number is that?  29/100	A 0.3	B 0.72	C 0.4
	D 0.7				D 0.29		
5 49 out of 100 are shaded. What decimal number is that?  49/100	A 0.84	B 0.49	C 0.42	6 94 out of 100 are shaded. What decimal number is that?  94/100	A 0.94	B 0.51	C 0.97
	D 0.78				D 0.48		
7 15 out of 100 are shaded. What decimal number is that?  15/100	A 0.68	B 0.15	C 0.91	8 62 out of 100 are shaded. What decimal number is that?  62/100	A 0.9	B 0.62	C 0.43
	D 0.39				D 0.37		