




Decimal Concept Image - Picture and Fraction (10s) to Decimal - Tenths

1 9 out of 10 are shaded.
What decimal number is that?


| | | |
|-----|-----|-----|
| A | B | C |
| 0.2 | 0.6 | 0.4 |
| D | | |
| 0.9 | | |



$\frac{9}{10}$

2 7 out of 10 are shaded.
What decimal number is that?


| | | |
|-----|-----|-----|
| A | B | C |
| 0.4 | 0.2 | 0.7 |
| D | | |
| 0.3 | | |



$\frac{7}{10}$

3 4 out of 10 are shaded.
What decimal number is that?


| | | |
|-----|-----|-----|
| A | B | C |
| 0.8 | 0.9 | 0.1 |
| D | | |
| 0.4 | | |



$\frac{4}{10}$

4 6 out of 10 are shaded.
What decimal number is that?


| | | |
|-----|-----|-----|
| A | B | C |
| 0.9 | 0.2 | 0.3 |
| D | | |
| 0.6 | | |



$\frac{6}{10}$

5 5 out of 10 are shaded.
What decimal number is that?


| | | |
|-----|-----|-----|
| A | B | C |
| 0.5 | 0.1 | 0.9 |
| D | | |
| 0.2 | | |



$\frac{5}{10}$

6 1 out of 10 are shaded.
What decimal number is that?


| | | |
|-----|-----|-----|
| A | B | C |
| 0.1 | 0.4 | 0.8 |
| D | | |
| 0.5 | | |



$\frac{1}{10}$

7 8 out of 10 are shaded.
What decimal number is that?


| | | |
|-----|-----|-----|
| A | B | C |
| 0.5 | 0.4 | 0.1 |
| D | | |
| 0.8 | | |



$\frac{8}{10}$

8 2 out of 10 are shaded.
What decimal number is that?

| | | |
|-----|-----|-----|
| A | B | C |
| 0.2 | 0.8 | 0.9 |
| D | | |
| 0.5 | | |



$\frac{2}{10}$