










Decimal Concept Image - Picture to Fraction (10s) - Tenths



1 What fraction of the shape is shaded? 	A $\frac{4}{10}$ D $\frac{2}{10}$	B $\frac{8}{10}$	C $\frac{9}{10}$	2 What fraction of the shape is shaded? 	A $\frac{3}{10}$ D $\frac{8}{10}$	B $\frac{2}{10}$	C $\frac{5}{10}$
3 What fraction of the shape is shaded? 	A $\frac{2}{10}$ D $\frac{5}{10}$	B $\frac{9}{10}$	C $\frac{1}{10}$	4 What fraction of the shape is shaded? 	A $\frac{5}{10}$ D $\frac{7}{10}$	B $\frac{3}{10}$	C $\frac{4}{10}$
5 What fraction of the shape is shaded? 	A $\frac{3}{10}$ D $\frac{6}{10}$	B $\frac{9}{10}$	C $\frac{2}{10}$	6 What fraction of the shape is shaded? 	A $\frac{1}{10}$ D $\frac{7}{10}$	B $\frac{5}{10}$	C $\frac{9}{10}$
7 What fraction of the shape is shaded? 	A $\frac{9}{10}$ D $\frac{4}{10}$	B $\frac{8}{10}$	C $\frac{2}{10}$				