




## Division by Skip Counting - Full Picture Set to Quotient

**1** Skip count by 5. How many starfishes would have 25 arms total?



A	B	C
3	1	7
D	E	
5	0	

**2** Skip count by 5. How many starfishes would have 20 arms total?



A	B	C
4	7	1
D	E	
8	6	

**3** Skip count by 5. How many hands would have 30 fingers total?




A	B	C
1	8	3
D	E	
6	2	

**4** Skip count by 5. How many starfishes would have 30 arms total?



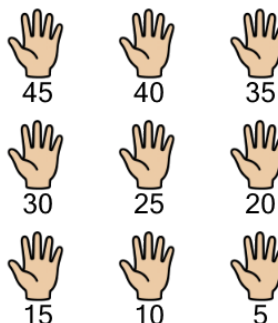
A	B	C
4	1	2
D	E	
3	6	

**5** Skip count by 5. How many hands would have 10 fingers total?



A	B	C
6	0	2
D		
5		

**6** Skip count by 5. How many hands would have 45 fingers total?




A	B	C
6	5	4
D	E	
9	12	

**7** Skip count by 5. How many starfishes would have 10 arms total?



A	B	C
4	0	6
D	E	
2	5	

**8** Skip count by 5. How many hands would have 25 fingers total?



A	B	C
5	7	3
D	E	
8	1	