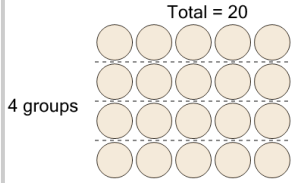


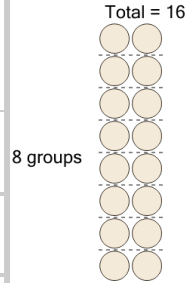
**1**



Use division to divide the set of shapes as shown. How many in each group?

A	16	B	5
C	30	D	7
E	0	F	500

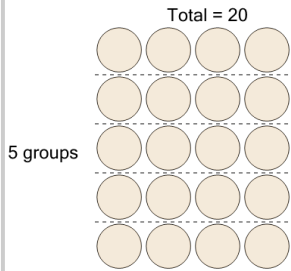
**2**



Use division to divide the set of shapes as shown. How many in each group?

A	3	B	1
C	2	D	300
E	100	F	8


**3**



Use division to divide the set of shapes as shown. How many in each group?

A	3	B	4
C	1	D	2
E	30	F	15

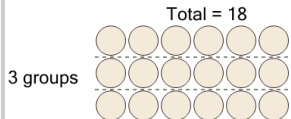
**4**



Use division to divide the set of shapes as shown. How many in each group?

A	2	B	10
C	50	D	0
E	3	F	20


**5**



Use division to divide the set of shapes as shown. How many in each group?

A	6	B	600
C	7	D	0
E	16	F	15

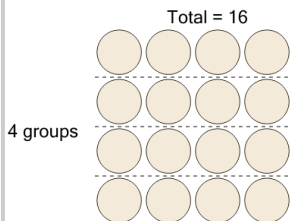
**6**



Use division to divide the set of shapes as shown. How many in each group?

A	3	B	2
C	30	D	0
E	300	F	12

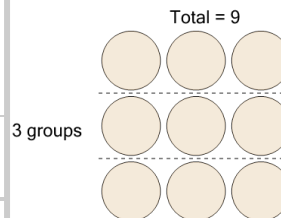
**7**



Use division to divide the set of shapes as shown. How many in each group?

A	1	B	3
C	6	D	4
E	0	F	50

**8**



Use division to divide the set of shapes as shown. How many in each group?

A	6	B	5
C	200	D	3
E	0	F	33