




Division - From Picture to Answer (Even)

**1**

Divide the 6 ice creams among the 2 kids. How many for each kid?

A	4	B	10
C	7	D	3
E	2	F	1

2


Divide the 10 donuts among the 2 kids. How many for each kid?

A	3	B	4
C	5	D	2
E	1	F	12

3


Divide the 12 ice creams among the 3 kids. How many for each kid?

A	3	B	7
C	13	D	8
E	4	F	12

4


Divide the 6 oranges among the 2 kids. How many for each kid?

A	7	B	9
C	3	D	10
E	11	F	1

5


Divide the 12 oranges among the 4 kids. How many for each kid?

A	3	B	12
C	4	D	7
E	11	F	6

6


Divide the 14 apples among the 2 kids. How many for each kid?

A	6	B	5
C	7	D	2
E	15	F	16

7

Divide the 4 oranges among the 2 kids. How many for each kid?

A	6	B	4
C	9	D	3
E	2	F	1

8

Divide the 4 candies among the 2 kids. How many for each kid?

A	3	B	2
C	5	D	8
E	11	F	4