





Division - From Picture to Answer (Even)

**1**

35

Divide the 35 apples among the 5 kids. How many for each kid?




A	12	B	7
C	2	D	3
E	1	F	13

**2**

18

Divide the 18 oranges among the 3 kids. How many for each kid?



A	1	B	9
C	3	D	6
E	12	F	13

**3**

30

Divide the 30 ice creams among the 5 kids. How many for each kid?



A	10	B	13
C	1	D	6
E	3	F	15

**4**

15

Divide the 15 candies among the 3 kids. How many for each kid?




A	1	B	11
C	9	D	2
E	4	F	5

**5**

28

Divide the 28 apples among the 4 kids. How many for each kid?



A	14	B	3
C	13	D	5
E	7	F	2

**6**

14

Divide the 14 donuts among the 2 kids. How many for each kid?



A	2	B	1
C	11	D	7
E	13	F	4

**7**

25

Divide the 25 oranges among the 5 kids. How many for each kid?



A	9	B	5
C	2	D	14
E	3	F	1

**8**

12

Divide the 12 candies among the 2 kids. How many for each kid?



A	6	B	7
C	14	D	11
E	13	F	1

