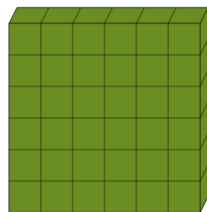




Exponents Concept Intro - Picture to Number - Squares Only

1

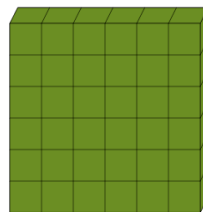
How many blocks are in the 6 wide by 6 long square?



A	B	C
32	42	32
D	E	F
36	33	29

2


How many blocks are in the 6 wide by 6 long square?



A	B	C
37	31	36
D	E	F
37	29	26

3


How many blocks are in the 10 wide by 10 long square?



A	B	C
106	99	98
D	E	F
100	93	107

4

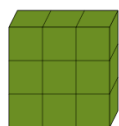
How many blocks are in the 11 wide by 11 long square?



A	B	C
124	114	114
D	E	F
114	121	119

5


How many blocks are in the 3 wide by 3 long square?



A	B	C
8	13	15
D	E	F
9	12	5

6


How many blocks are in the 9 wide by 9 long square?



A	B	C
71	76	81
D	E	F
77	78	87

7

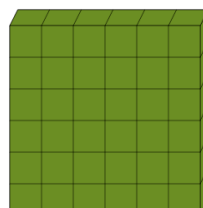
How many blocks are in the 8 wide by 8 long square?



A	B	C
72	65	73
D	E	F
73	65	64

8

How many blocks are in the 6 wide by 6 long square?



A	B	C
39	37	37
D	E	F
32	26	36