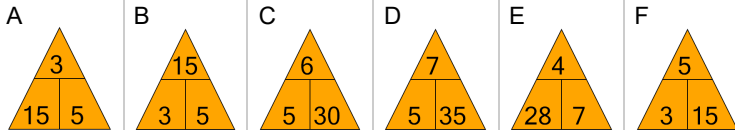




Fact Family - Multiplication - Fact to Triangle

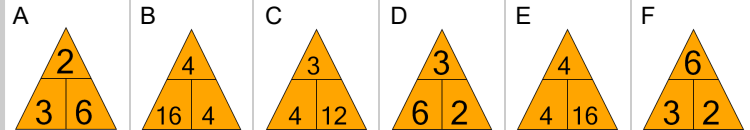
1 What fact family triangle would give this division fact?

$$15 \div 3 = 5$$



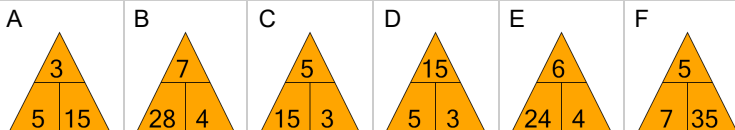
2 What fact family triangle would give this division fact?

$$6 \div 2 = 3$$



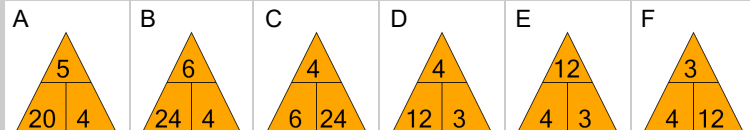
3 What fact family triangle would give this division fact?

$$15 \div 5 = 3$$



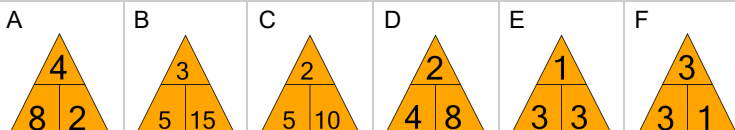
4 What fact family triangle would give this division fact?

$$12 \div 3 = 4$$



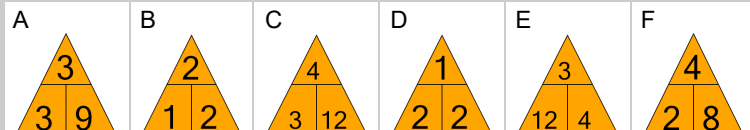
5 What fact family triangle would give this division fact?

$$3 \div 3 = 1$$



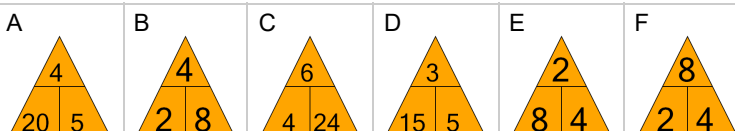
6 What fact family triangle would give this division fact?

$$2 \div 1 = 2$$



7 What fact family triangle would give this division fact?

$$8 \div 4 = 2$$



8 What fact family triangle would give this multiplication fact?

$$3 \times 2 = 6$$

