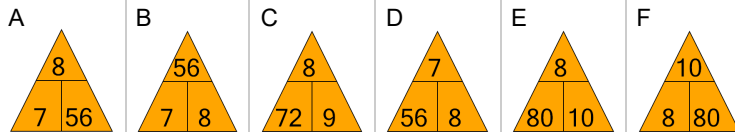


## Fact Family - Multiplication - Fact to Triangle

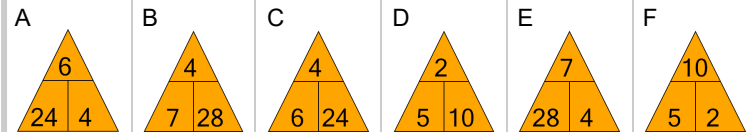
**1** What fact family triangle would give this multiplication fact?

$$8 \times 7 = 56$$



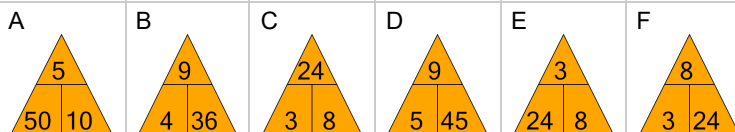
**2** What fact family triangle would give this multiplication fact?

$$2 \times 5 = 10$$



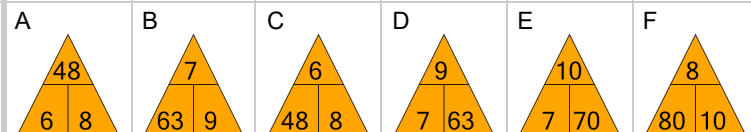
**3** What fact family triangle would give this multiplication fact?

$$3 \times 8 = 24$$



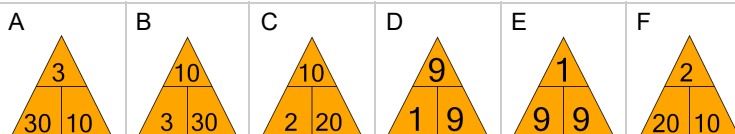
**4** What fact family triangle would give this multiplication fact?

$$6 \times 8 = 48$$



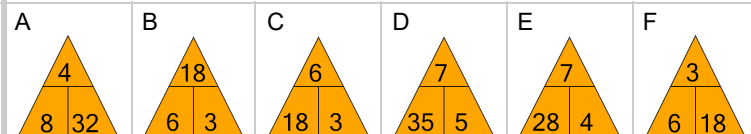
**5** What fact family triangle would give this division fact?

$$9 \div 9 = 1$$



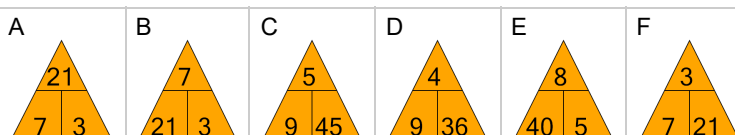
**6** What fact family triangle would give this multiplication fact?

$$3 \times 6 = 18$$



**7** What fact family triangle would give this multiplication fact?

$$7 \times 3 = 21$$



**8** What fact family triangle would give this division fact?

$$14 \div 7 = 2$$

