


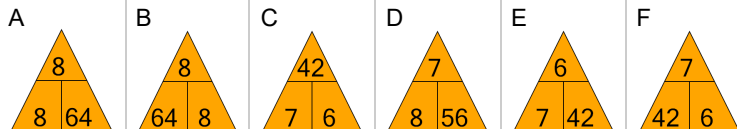


Fact Family - Multiplication - Fact to Triangle



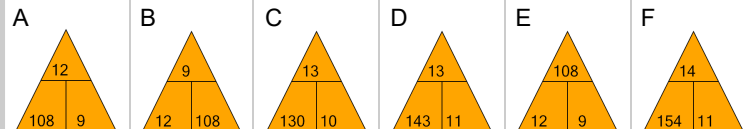
1 What fact family triangle would give this division fact?

$$42 \div 6 = 7$$



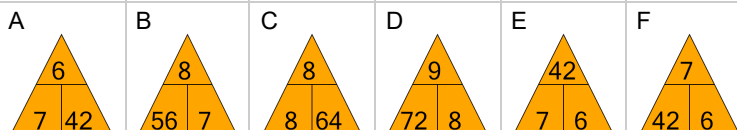
2 What fact family triangle would give this division fact?

$$108 \div 12 = 9$$



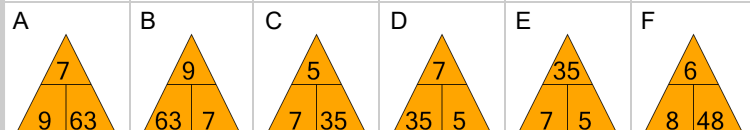
3 What fact family triangle would give this division fact?

$$42 \div 7 = 6$$



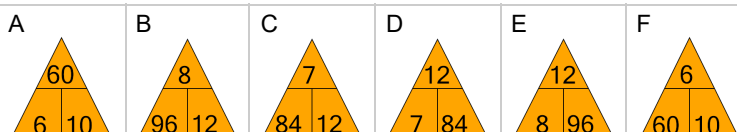
4 What fact family triangle would give this division fact?

$$35 \div 5 = 7$$



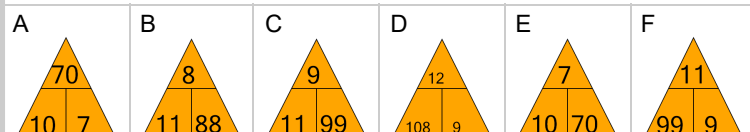
5 What fact family triangle would give this multiplication fact?

$$6 \times 10 = 60$$



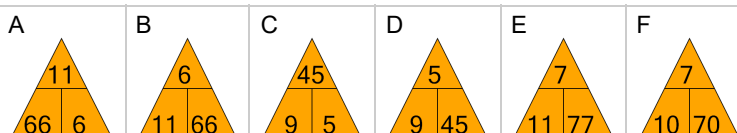
6 What fact family triangle would give this division fact?

$$70 \div 7 = 10$$



7 What fact family triangle would give this division fact?

$$45 \div 9 = 5$$



8 What fact family triangle would give this division fact?

$$63 \div 7 = 9$$

