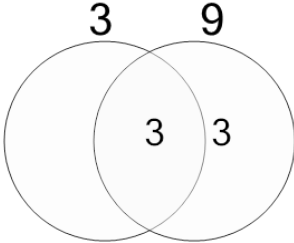
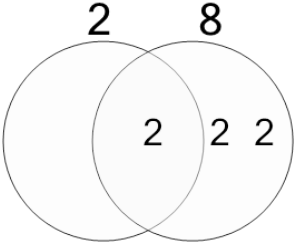
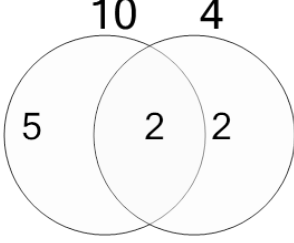
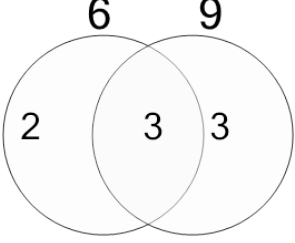
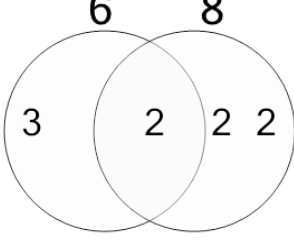
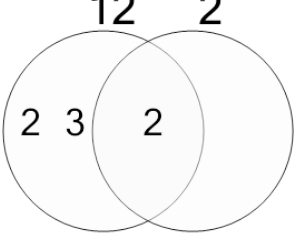
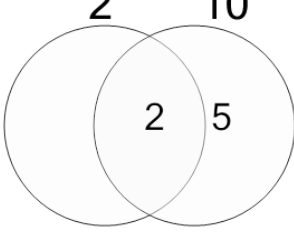
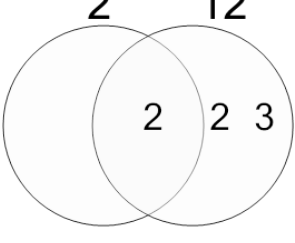


## Factoring - Venn Diagrams - 2 Numbers - Populated Venn to GCF

<p><b>1</b> Find the GCF of these numbers by multiplying the shared factors in the center</p> 	<table border="1"> <thead> <tr> <th>A</th> <th>B</th> <th>C</th> </tr> </thead> <tbody> <tr> <td>6</td> <td>1</td> <td>2</td> </tr> <tr> <th>D</th> <th>E</th> <th>F</th> </tr> <tr> <td>3</td> <td>7</td> <td>22</td> </tr> </tbody> </table>	A	B	C	6	1	2	D	E	F	3	7	22	<p><b>2</b> Find the GCF of these numbers by multiplying the shared factors in the center</p> 	<table border="1"> <thead> <tr> <th>A</th> <th>B</th> <th>C</th> </tr> </thead> <tbody> <tr> <td>14</td> <td>1</td> <td>8</td> </tr> <tr> <th>D</th> <th>E</th> <th>F</th> </tr> <tr> <td>16</td> <td>6</td> <td>2</td> </tr> </tbody> </table>	A	B	C	14	1	8	D	E	F	16	6	2
A	B	C																									
6	1	2																									
D	E	F																									
3	7	22																									
A	B	C																									
14	1	8																									
D	E	F																									
16	6	2																									
<p><b>3</b> Find the GCF of these numbers by multiplying the shared factors in the center</p> 	<table border="1"> <thead> <tr> <th>A</th> <th>B</th> <th>C</th> </tr> </thead> <tbody> <tr> <td>1</td> <td>7</td> <td>5</td> </tr> <tr> <th>D</th> <th>E</th> <th>F</th> </tr> <tr> <td>8</td> <td>11</td> <td>2</td> </tr> </tbody> </table>	A	B	C	1	7	5	D	E	F	8	11	2	<p><b>4</b> Find the GCF of these numbers by multiplying the shared factors in the center</p> 	<table border="1"> <thead> <tr> <th>A</th> <th>B</th> <th>C</th> </tr> </thead> <tbody> <tr> <td>11</td> <td>1</td> <td>3</td> </tr> <tr> <th>D</th> <th>E</th> <th>F</th> </tr> <tr> <td>9</td> <td>6</td> <td>2</td> </tr> </tbody> </table>	A	B	C	11	1	3	D	E	F	9	6	2
A	B	C																									
1	7	5																									
D	E	F																									
8	11	2																									
A	B	C																									
11	1	3																									
D	E	F																									
9	6	2																									
<p><b>5</b> Find the GCF of these numbers by multiplying the shared factors in the center</p> 	<table border="1"> <thead> <tr> <th>A</th> <th>B</th> <th>C</th> </tr> </thead> <tbody> <tr> <td>7</td> <td>4</td> <td>1</td> </tr> <tr> <th>D</th> <th>E</th> <th>F</th> </tr> <tr> <td>14</td> <td>6</td> <td>2</td> </tr> </tbody> </table>	A	B	C	7	4	1	D	E	F	14	6	2	<p><b>6</b> Find the GCF of these numbers by multiplying the shared factors in the center</p> 	<table border="1"> <thead> <tr> <th>A</th> <th>B</th> <th>C</th> </tr> </thead> <tbody> <tr> <td>2</td> <td>4</td> <td>3</td> </tr> <tr> <th>D</th> <th>E</th> <th>F</th> </tr> <tr> <td>10</td> <td>18</td> <td>1</td> </tr> </tbody> </table>	A	B	C	2	4	3	D	E	F	10	18	1
A	B	C																									
7	4	1																									
D	E	F																									
14	6	2																									
A	B	C																									
2	4	3																									
D	E	F																									
10	18	1																									
<p><b>7</b> Find the GCF of these numbers by multiplying the shared factors in the center</p> 	<table border="1"> <thead> <tr> <th>A</th> <th>B</th> <th>C</th> </tr> </thead> <tbody> <tr> <td>5</td> <td>6</td> <td>4</td> </tr> <tr> <th>D</th> <th>E</th> <th>F</th> </tr> <tr> <td>2</td> <td>12</td> <td>1</td> </tr> </tbody> </table>	A	B	C	5	6	4	D	E	F	2	12	1	<p><b>8</b> Find the GCF of these numbers by multiplying the shared factors in the center</p> 	<table border="1"> <thead> <tr> <th>A</th> <th>B</th> <th>C</th> </tr> </thead> <tbody> <tr> <td>9</td> <td>2</td> <td>17</td> </tr> <tr> <th>D</th> <th>E</th> <th>F</th> </tr> <tr> <td>6</td> <td>5</td> <td>10</td> </tr> </tbody> </table>	A	B	C	9	2	17	D	E	F	6	5	10
A	B	C																									
5	6	4																									
D	E	F																									
2	12	1																									
A	B	C																									
9	2	17																									
D	E	F																									
6	5	10																									