
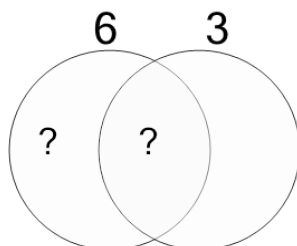




Factoring - Venn Diagrams - 2 Numbers - To LCM

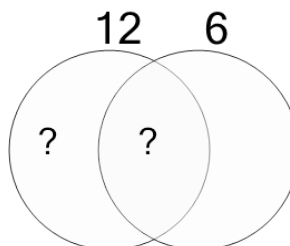


1 Use the factor diagram to find the lowest common multiple of these numbers



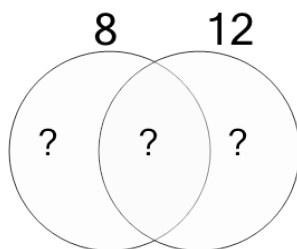
A	B	C
2	30	13
D	E	F
6	5	37

2 Use the factor diagram to find the lowest common multiple of these numbers



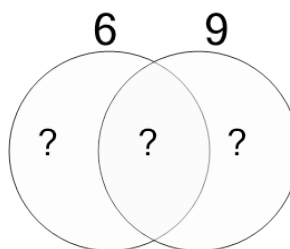
A	B	C
12	60	14
D	E	F
76	55	7

3 Use the factor diagram to find the lowest common multiple of these numbers



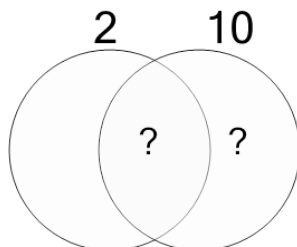
A	B	C
10	100	24
D	E	F
15	7	19

4 Use the factor diagram to find the lowest common multiple of these numbers



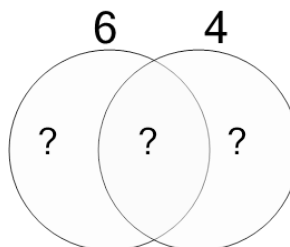
A	B	C
51	19	112
D	E	F
89	18	68

5 Use the factor diagram to find the lowest common multiple of these numbers



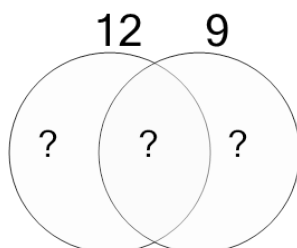
A	B	C
10	1	4
D	E	F
13	8	6

6 Use the factor diagram to find the lowest common multiple of these numbers



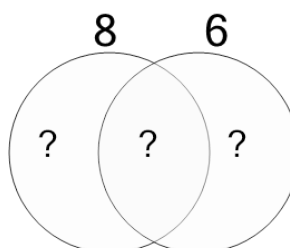
A	B	C
11	2	12
D	E	F
8	1	40

7 Use the factor diagram to find the lowest common multiple of these numbers



A	B	C
9	10	74
D	E	F
33	19	36

8 Use the factor diagram to find the lowest common multiple of these numbers



A	B	C
24	96	94
D	E	F
22	72	11