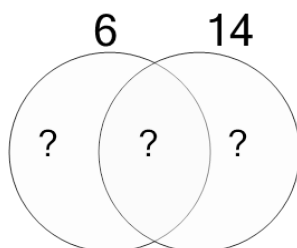




Factoring - Venn Diagrams - 2 Numbers - To LCM

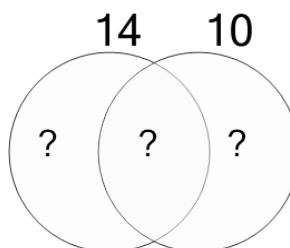


1 Use the factor diagram to find the lowest common multiple of these numbers



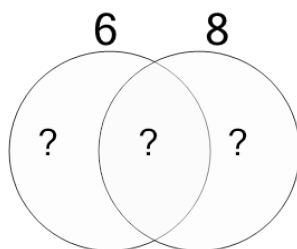
A	B	C
293	45	41
D	E	F
42	291	4

2 Use the factor diagram to find the lowest common multiple of these numbers



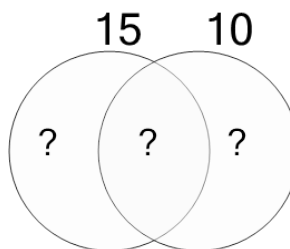
A	B	C
276	70	67
D	E	F
10	209	73

3 Use the factor diagram to find the lowest common multiple of these numbers



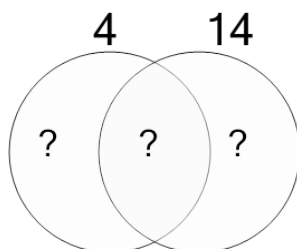
A	B	C
9	15	5
D	E	F
12	24	46

4 Use the factor diagram to find the lowest common multiple of these numbers



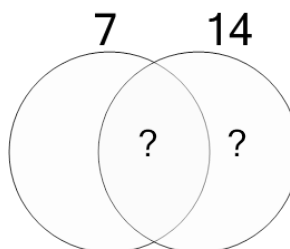
A	B	C
34	6	184
D	E	F
85	30	5

5 Use the factor diagram to find the lowest common multiple of these numbers



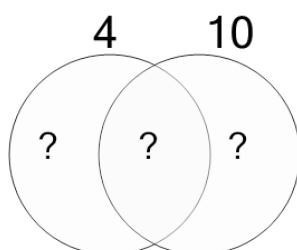
A	B	C
194	141	88
D	E	F
167	30	28

6 Use the factor diagram to find the lowest common multiple of these numbers



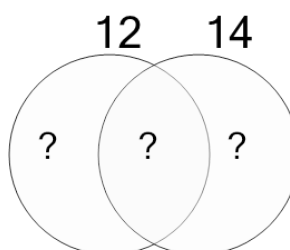
A	B	C
11	95	14
D	E	F
15	9	4

7 Use the factor diagram to find the lowest common multiple of these numbers



A	B	C
20	3	22
D	E	F
9	141	61

8 Use the factor diagram to find the lowest common multiple of these numbers



A	B	C
419	84	250
D	E	F
83	81	88