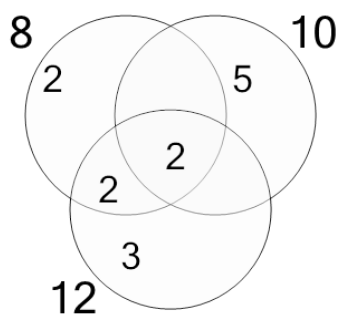


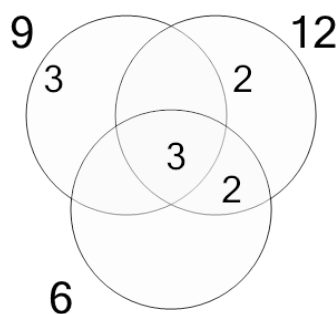
Factoring - Venn Diagrams - 3 Numbers - Populated Venn to LCM

1 Use the factor diagram to find the lowest common multiple of these numbers



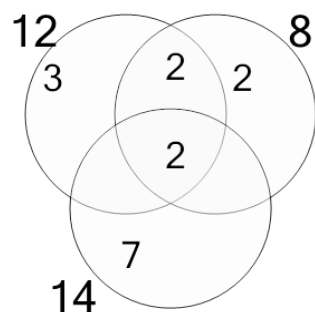
A	B	C
21	61	120
D	E	F
124	720	478

2 Use the factor diagram to find the lowest common multiple of these numbers



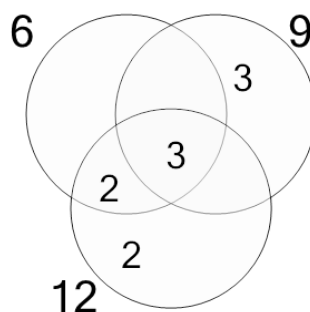
A	B	C
36	17	75
D	E	F
13	11	40

3 Use the factor diagram to find the lowest common multiple of these numbers



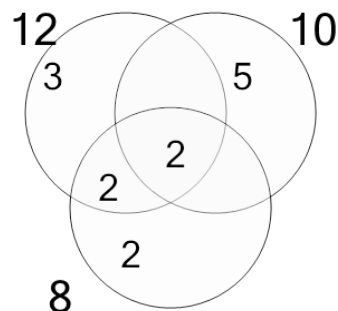
A	B	C
165	168	59
D	E	F
163	79	506

4 Use the factor diagram to find the lowest common multiple of these numbers



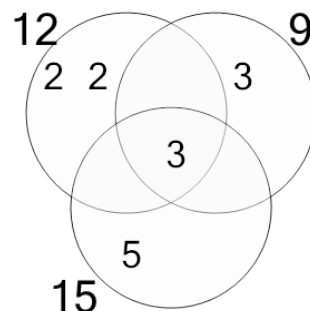
A	B	C
110	254	18
D	E	F
13	36	253

5 Use the factor diagram to find the lowest common multiple of these numbers



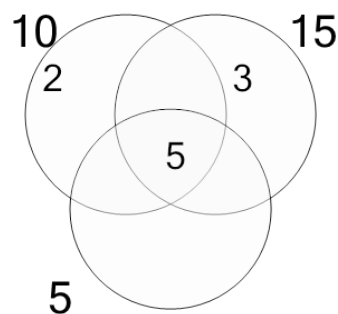
A	B	C
120	21	604
D	E	F
59	123	124

6 Use the factor diagram to find the lowest common multiple of these numbers



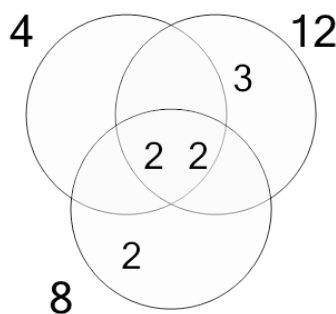
A	B	C
176	90	39
D	E	F
360	357	180

7 Use the factor diagram to find the lowest common multiple of these numbers



A	B	C
10	9	59
D	E	F
30	4	115

8 Use the factor diagram to find the lowest common multiple of these numbers



A	B	C
24	28	147
D	E	F
12	164	140