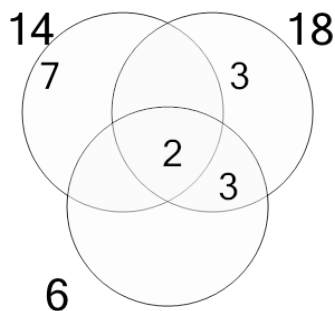




Factoring - Venn Diagrams - 3 Numbers - Populated Venn to LCM

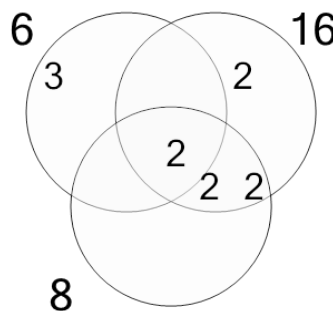


1 Use the factor diagram to find the lowest common multiple of these numbers



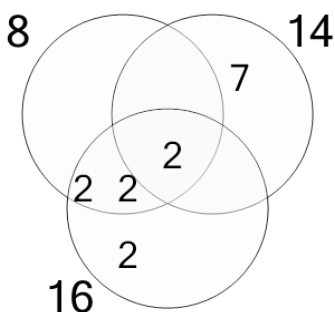
A	B	C
44	122	13
D	E	F
634	126	881

2 Use the factor diagram to find the lowest common multiple of these numbers



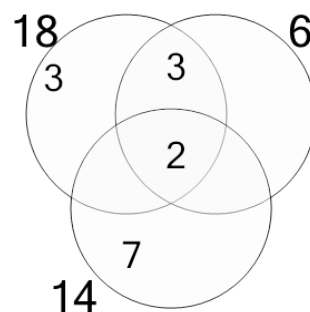
A	B	C
48	147	194
D	E	F
25	43	20

3 Use the factor diagram to find the lowest common multiple of these numbers



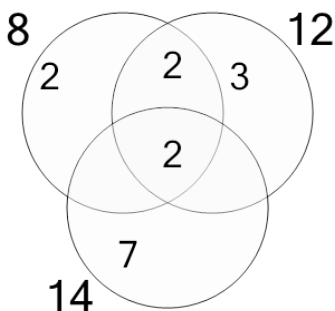
A	B	C
16	221	338
D	E	F
112	563	57

4 Use the factor diagram to find the lowest common multiple of these numbers



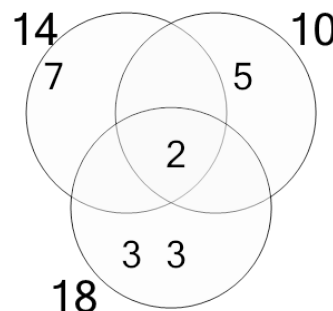
A	B	C
43	42	633
D	E	F
44	123	126

5 Use the factor diagram to find the lowest common multiple of these numbers



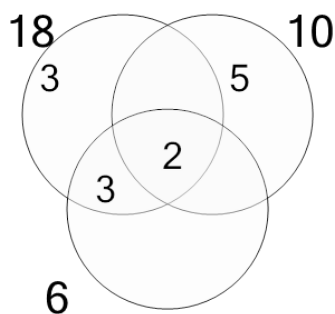
A	B	C
80	172	168
D	E	F
1,180	88	27

6 Use the factor diagram to find the lowest common multiple of these numbers



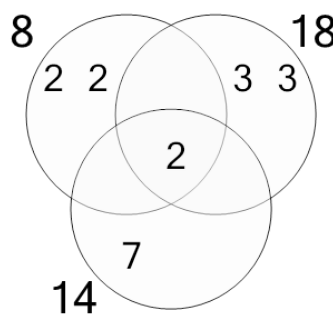
A	B	C
318	630	85
D	E	F
2,516	628	631

7 Use the factor diagram to find the lowest common multiple of these numbers



A	B	C
274	626	270
D	E	F
90	25	184

8 Use the factor diagram to find the lowest common multiple of these numbers



A	B	C
504	248	163
D	E	F
2,516	252	3,524