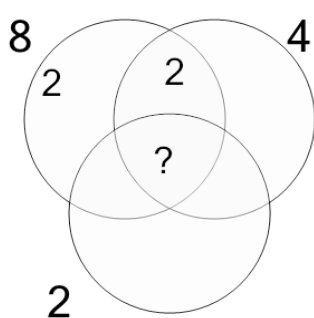




## Factoring - Venn Diagrams - 3 Numbers - Populated Venn without Center to GCF

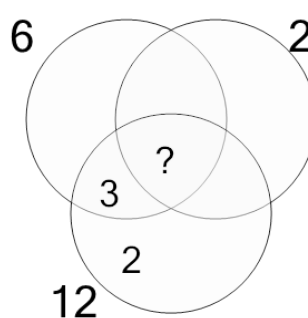


**1** Complete the factor diagram and find the greatest common factor of these numbers



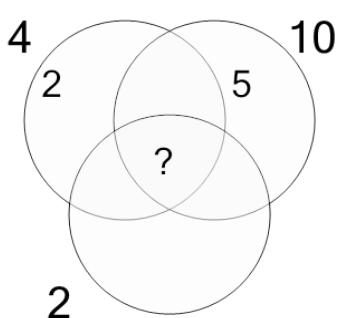
A	B	C
5	10	4
D	E	F
6	2	1

**2** Complete the factor diagram and find the greatest common factor of these numbers



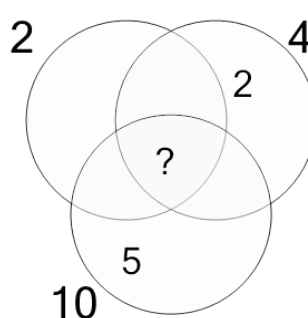
A	B	C
3	2	10
D	E	F
5	8	13

**3** Complete the factor diagram and find the greatest common factor of these numbers



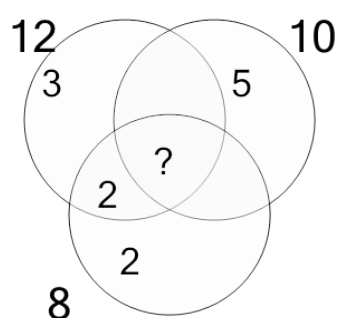
A	B	C
2	5	14
D	E	F
4	3	1

**4** Complete the factor diagram and find the greatest common factor of these numbers



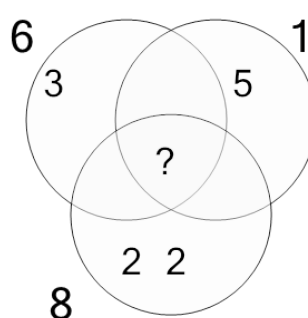
A	B	C
7	2	8
D	E	F
1	5	4

**5** Complete the factor diagram and find the greatest common factor of these numbers



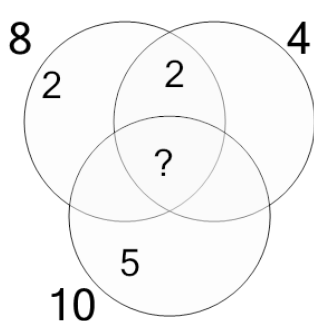
A	B	C
6	9	3
D	E	F
1	2	14

**6** Complete the factor diagram and find the greatest common factor of these numbers



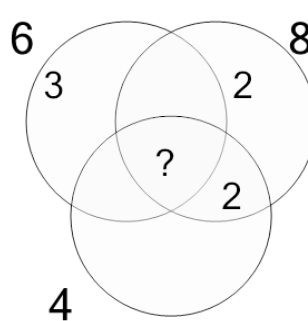
A	B	C
2	1	6
D	E	F
10	13	7

**7** Complete the factor diagram and find the greatest common factor of these numbers



A	B	C
16	2	5
D	E	F
1	11	3

**8** Complete the factor diagram and find the greatest common factor of these numbers



A	B	C
1	2	3
D	E	F
7	12	4