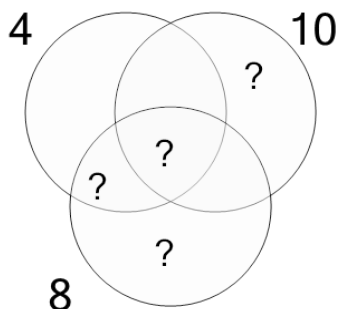




Factoring - Venn Diagrams - 3 Numbers - To GCF

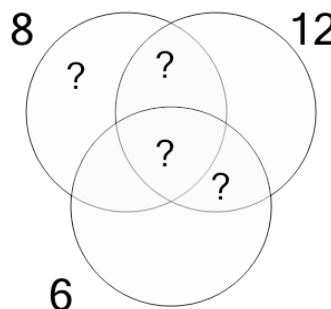


1 Use the factor diagram to find the greatest common factor of these numbers



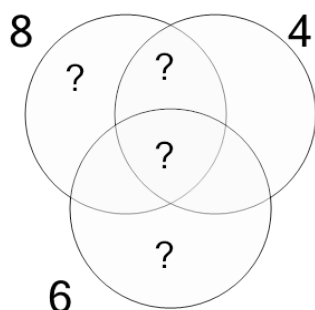
A	B	C
2	1	7
D	E	F
11	4	3

2 Use the factor diagram to find the greatest common factor of these numbers



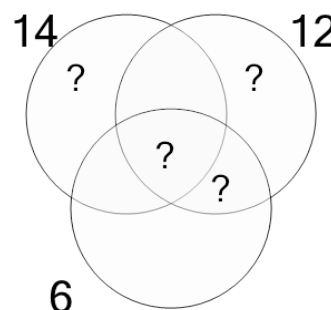
A	B	C
14	10	3
D	E	F
6	2	9

3 Use the factor diagram to find the greatest common factor of these numbers



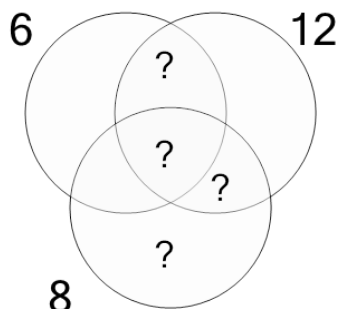
A	B	C
1	9	2
D	E	F
5	3	8

4 Use the factor diagram to find the greatest common factor of these numbers



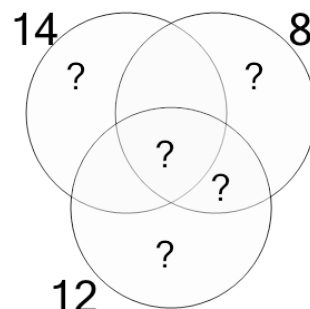
A	B	C
11	9	1
D	E	F
14	4	2

5 Use the factor diagram to find the greatest common factor of these numbers



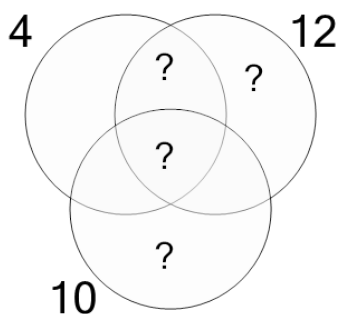
A	B	C
8	3	2
D	E	F
1	5	7

6 Use the factor diagram to find the greatest common factor of these numbers



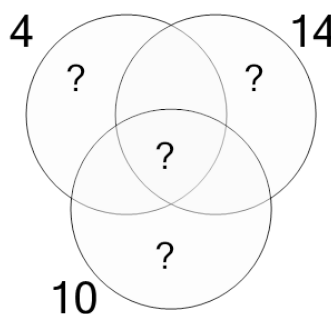
A	B	C
9	4	1
D	E	F
2	7	13

7 Use the factor diagram to find the greatest common factor of these numbers



A	B	C
1	3	4
D	E	F
2	10	5

8 Use the factor diagram to find the greatest common factor of these numbers



A	B	C
5	2	1
D	E	F
9	3	12