
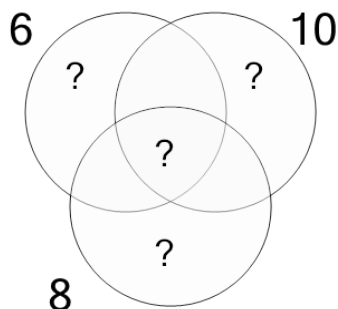




Factoring - Venn Diagrams - 3 Numbers - To GCF

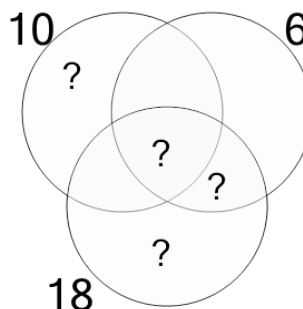


1 Use the factor diagram to find the greatest common factor of these numbers



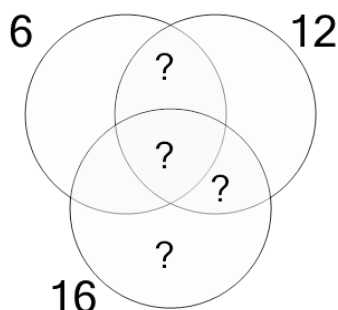
A	B	C
4	10	3
D	E	F
2	5	1

2 Use the factor diagram to find the greatest common factor of these numbers



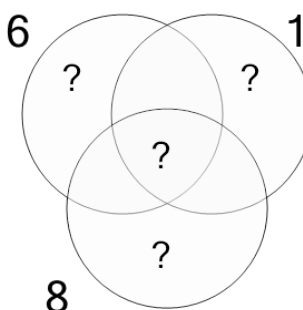
A	B	C
6	1	8
D	E	F
12	2	3

3 Use the factor diagram to find the greatest common factor of these numbers



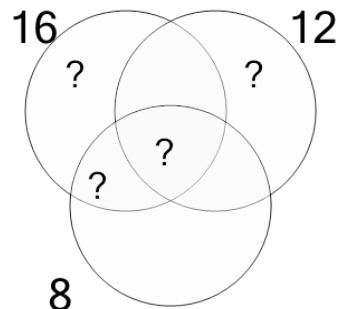
A	B	C
9	5	6
D	E	F
2	1	8

4 Use the factor diagram to find the greatest common factor of these numbers



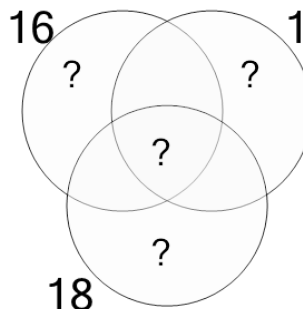
A	B	C
3	10	5
D	E	F
9	1	2

5 Use the factor diagram to find the greatest common factor of these numbers



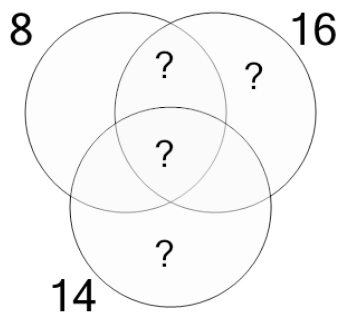
A	B	C
4	5	2
D	E	F
23	3	6

6 Use the factor diagram to find the greatest common factor of these numbers



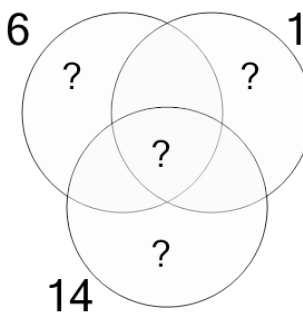
A	B	C
8	1	7
D	E	F
10	2	4

7 Use the factor diagram to find the greatest common factor of these numbers



A	B	C
6	12	4
D	E	F
2	1	3

8 Use the factor diagram to find the greatest common factor of these numbers



A	B	C
5	1	2
D	E	F
4	15	9