
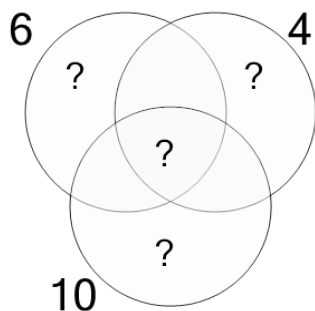




Factoring - Venn Diagrams - 3 Numbers - To LCM

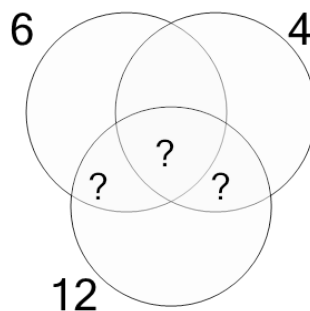


1 Use the factor diagram to find the lowest common multiple of these numbers



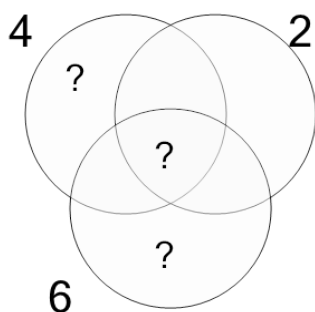
A	B	C
359	60	21
D	E	F
116	24	182

2 Use the factor diagram to find the lowest common multiple of these numbers



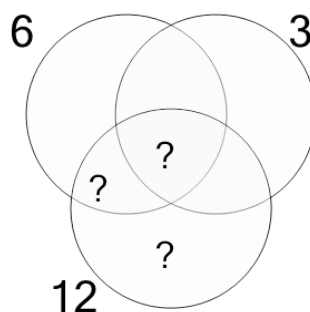
A	B	C
68	34	12
D	E	F
59	7	2

3 Use the factor diagram to find the lowest common multiple of these numbers



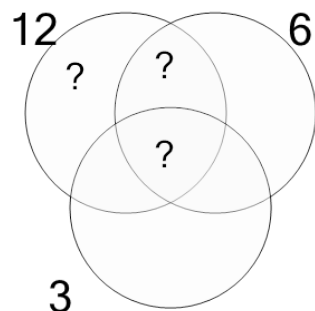
A	B	C
39	12	10
D	E	F
31	2	38

4 Use the factor diagram to find the lowest common multiple of these numbers



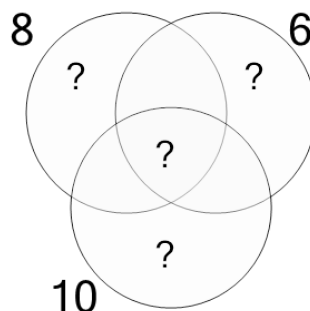
A	B	C
10	39	12
D	E	F
60	9	1

5 Use the factor diagram to find the lowest common multiple of these numbers



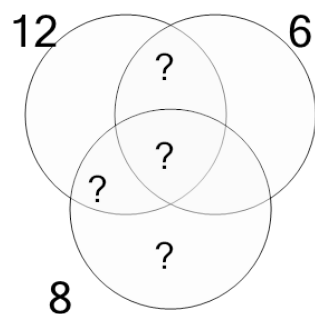
A	B	C
10	12	13
D	E	F
40	8	74

6 Use the factor diagram to find the lowest common multiple of these numbers



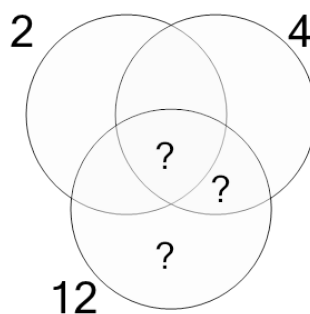
A	B	C
120	236	124
D	E	F
27	238	235

7 Use the factor diagram to find the lowest common multiple of these numbers



A	B	C
172	28	11
D	E	F
16	24	10

8 Use the factor diagram to find the lowest common multiple of these numbers



A	B	C
1	12	6
D	E	F
4	7	5