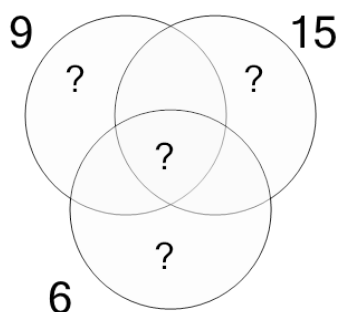




Factoring - Venn Diagrams - 3 Numbers - To LCM

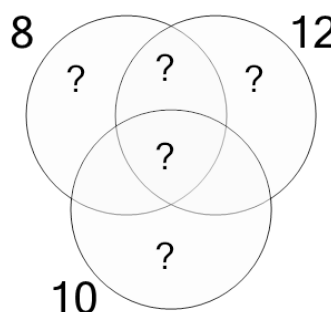


1 Use the factor diagram to find the lowest common multiple of these numbers



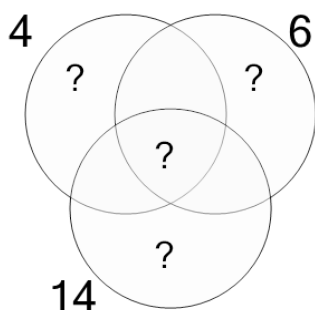
A	B	C
25	90	22
D	E	F
540	86	27

2 Use the factor diagram to find the lowest common multiple of these numbers



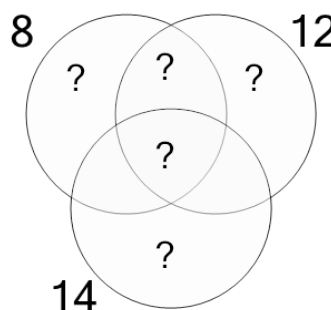
A	B	C
63	360	479
D	E	F
120	40	42

3 Use the factor diagram to find the lowest common multiple of these numbers



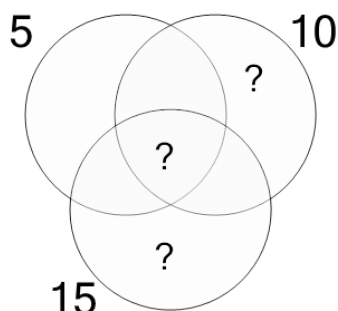
A	B	C
588	585	88
D	E	F
79	419	84

4 Use the factor diagram to find the lowest common multiple of these numbers



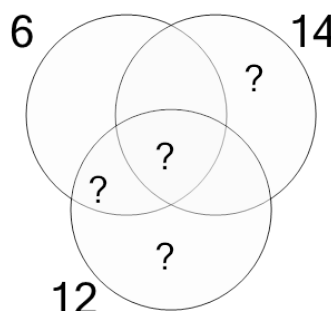
A	B	C
508	168	84
D	E	F
165	80	164

5 Use the factor diagram to find the lowest common multiple of these numbers



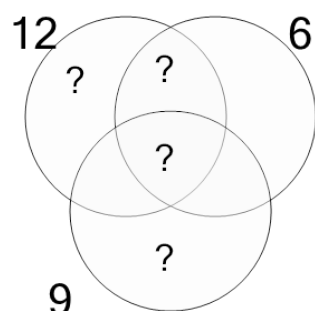
A	B	C
12	63	13
D	E	F
17	30	29

6 Use the factor diagram to find the lowest common multiple of these numbers



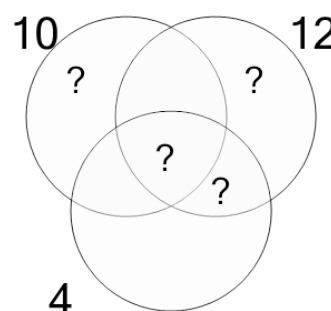
A	B	C
84	40	16
D	E	F
43	30	11

7 Use the factor diagram to find the lowest common multiple of these numbers



A	B	C
36	34	31
D	E	F
69	7	148

8 Use the factor diagram to find the lowest common multiple of these numbers



A	B	C
16	180	423
D	E	F
60	15	177