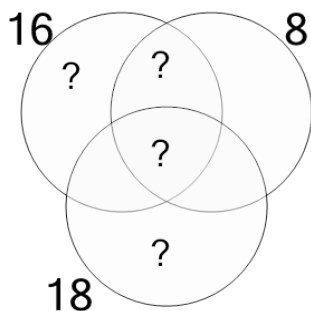


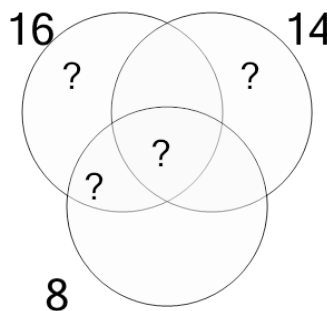
Factoring - Venn Diagrams - 3 Numbers - To LCM

1 Use the factor diagram to find the lowest common multiple of these numbers



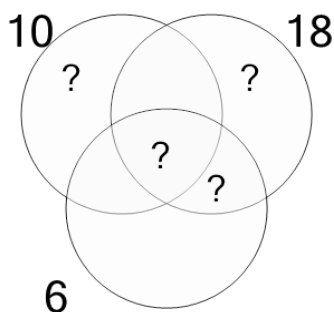
A	B	C
52	865	144
D	E	F
283	430	67

2 Use the factor diagram to find the lowest common multiple of these numbers



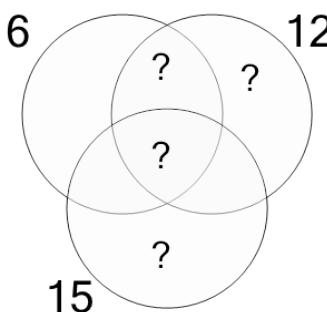
A	B	C
112	668	57
D	E	F
111	333	110

3 Use the factor diagram to find the lowest common multiple of these numbers



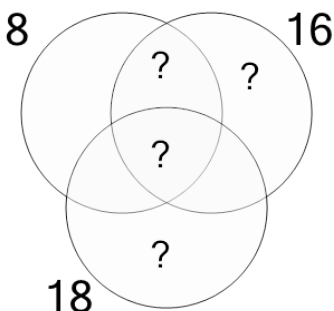
A	B	C
266	16	44
D	E	F
26	87	90

4 Use the factor diagram to find the lowest common multiple of these numbers



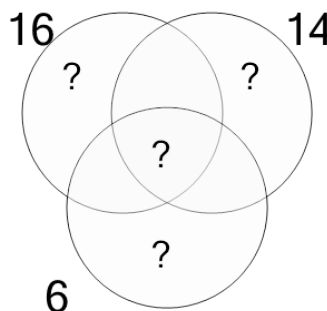
A	B	C
34	29	15
D	E	F
59	60	180

5 Use the factor diagram to find the lowest common multiple of these numbers



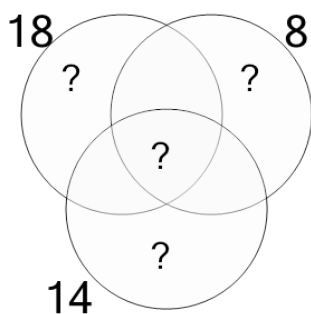
A	B	C
290	69	578
D	E	F
146	75	144

6 Use the factor diagram to find the lowest common multiple of these numbers



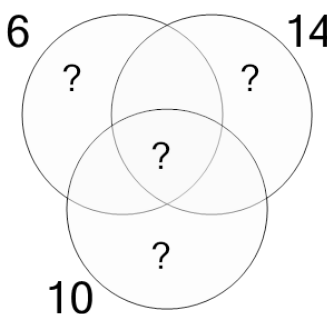
A	B	C
166	1,346	168
D	E	F
336	333	670

7 Use the factor diagram to find the lowest common multiple of these numbers



A	B	C
3,020	499	3,025
D	E	F
504	255	249

8 Use the factor diagram to find the lowest common multiple of these numbers



A	B	C
1,264	210	838
D	E	F
34	32	211