





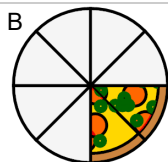
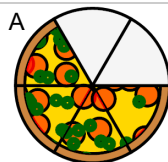
Fraction Division - Pizza Concept Intro - Picture and People to Picture




1



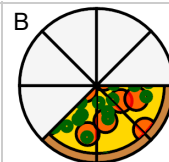
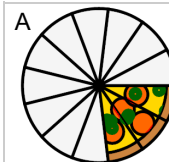
If 2 people split $\frac{2}{4}$ of a pizza,
how much does each person
get?




2



If 2 people split $\frac{3}{4}$ of a pizza,
how much does each person
get?



3



If 2 people split $\frac{2}{3}$ of a pizza,
how much does each person
get?

