

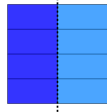


Fraction Division - Simple by Whole Concept Intro - Equation to Picture


1 Which picture shows this fraction division?

$$\frac{3}{4} \div 2$$

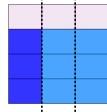
A



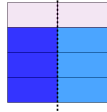
B



C



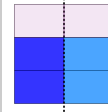
D



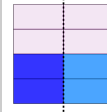
2 Which picture shows this fraction division?

$$\frac{2}{3} \div 2$$


A



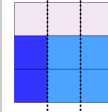
B



C



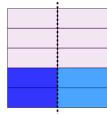
D



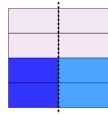
3 Which picture shows this fraction division?

$$\frac{2}{4} \div 2$$

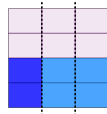
A



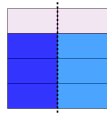
B



C



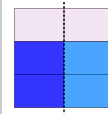
D



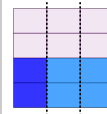
4 Which picture shows this fraction division?

$$\frac{2}{3} \div 3$$

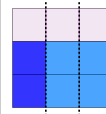
A



B



C



D

