

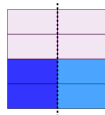


Fraction Division - Simple by Whole Concept Intro - Equation to Picture

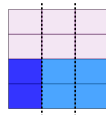
1 Which picture shows this fraction division?

$$\frac{2}{4} \div 3$$

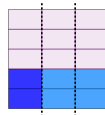
A



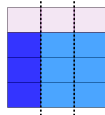
B



C



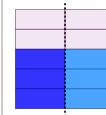
D



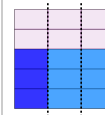
2 Which picture shows this fraction division?

$$\frac{3}{5} \div 3$$

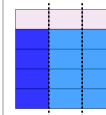
A



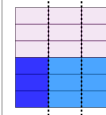
B



C




D



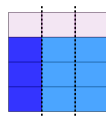
3 Which picture shows this fraction division?

$$\frac{3}{4} \div 3$$

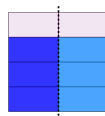
A



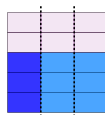
B



C



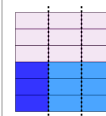
D



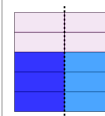
4 Which picture shows this fraction division?

$$\frac{3}{6} \div 2$$


A




B



C



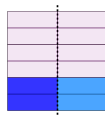
D



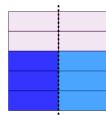
5 Which picture shows this fraction division?

$$\frac{2}{5} \div 2$$

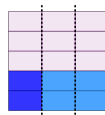
A



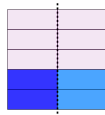
B



C



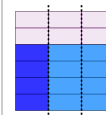
D




6 Which picture shows this fraction division?

$$\frac{4}{5} \div 3$$

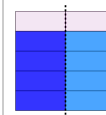
A



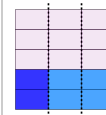
B



C



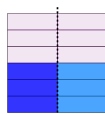
D



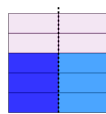
7 Which picture shows this fraction division?

$$\frac{3}{5} \div 2$$

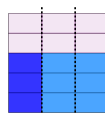
A



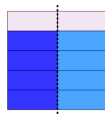
B



C



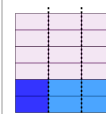
D



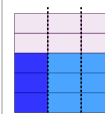
8 Which picture shows this fraction division?

$$\frac{2}{5} \div 3$$

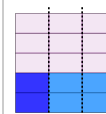
A



B



C



D

