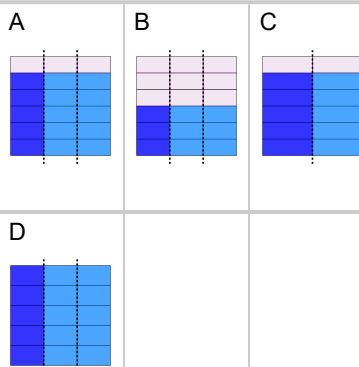




## Fraction Division - Simple by Whole Concept Intro - Equation to Picture

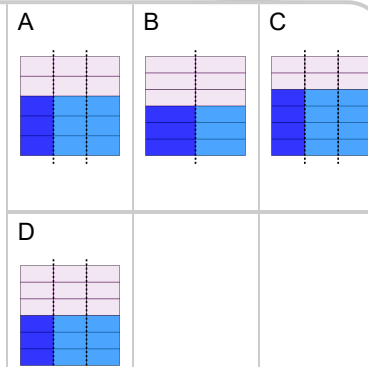
1 Which picture shows this fraction division?

$$\frac{5}{6} \div 3$$



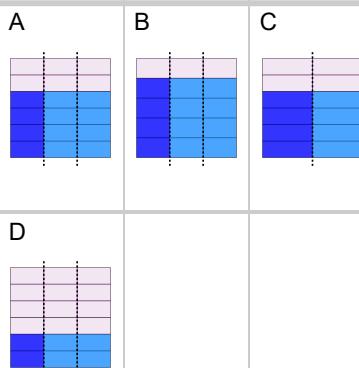
2 Which picture shows this fraction division?

$$\frac{3}{6} \div 3$$



3 Which picture shows this fraction division?

$$\frac{4}{6} \div 3$$



4 Which picture shows this fraction division?

$$\frac{2}{6} \div 3$$

