
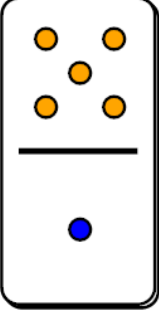
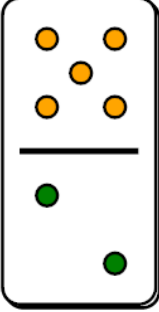
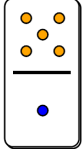
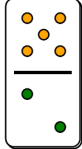
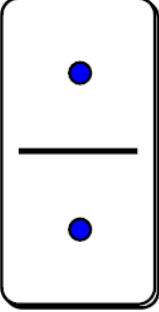
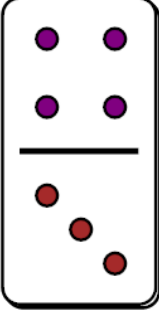
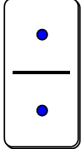

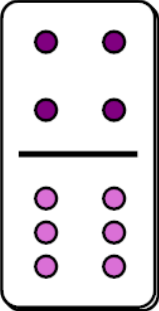
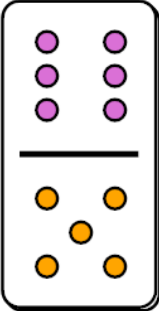
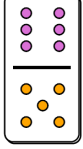
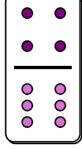
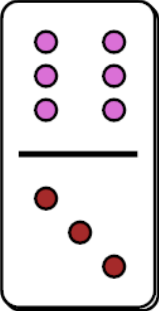
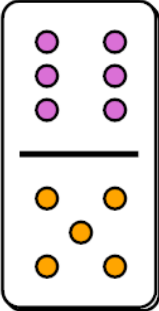
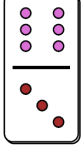
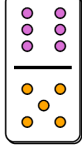
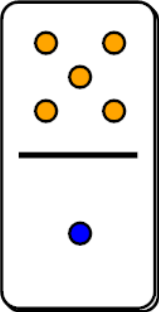
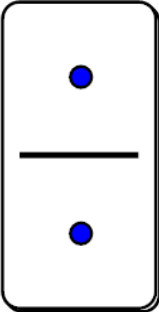
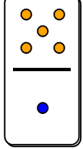
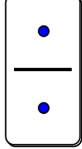
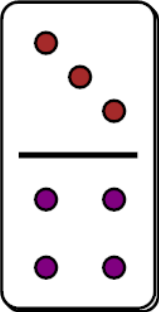
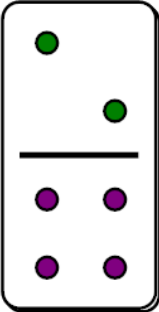
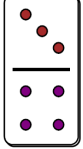
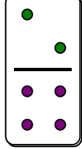
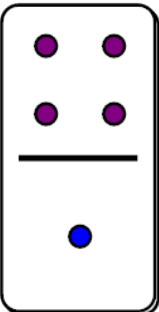
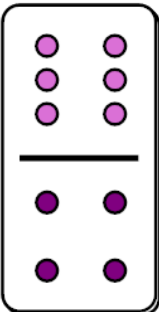
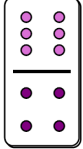
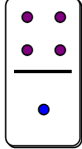
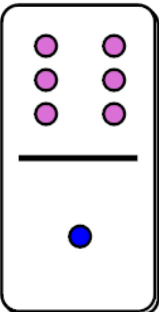
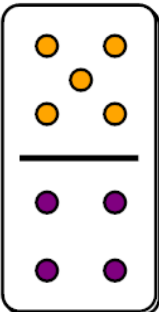
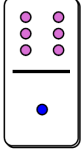




## Fraction Dominoes Compare - All



<b>1</b>  or 	Which domino fraction would be larger?	A 	B 
<b>2</b>  or 	Which domino fraction would be larger?	A 	B 
<b>3</b>  or 	Which domino fraction would be larger?	A 	B 
<b>4</b>  or 	Which domino fraction would be larger?	A 	B 
<b>5</b>  or 	Which domino fraction would be larger?	A 	B 
<b>6</b>  or 	Which domino fraction would be larger?	A 	B 
<b>7</b>  or 	Which domino fraction would be larger?	A 	B 
<b>8</b>  or 	Which domino fraction would be larger?	A 	B 