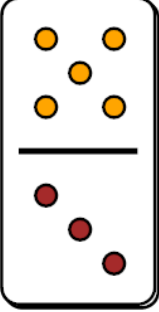
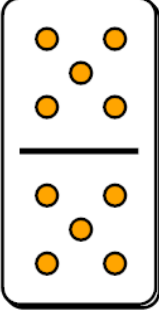
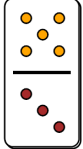
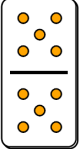
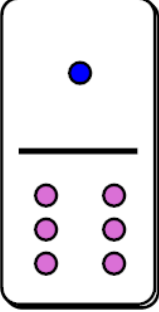
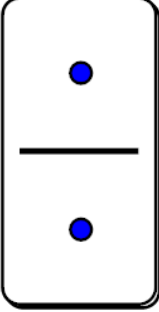
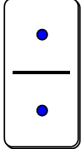
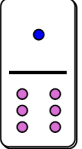
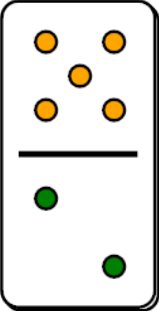
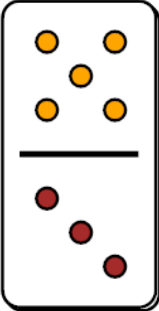
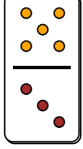
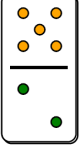
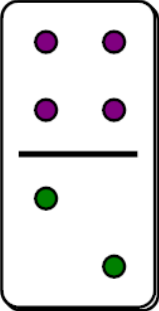
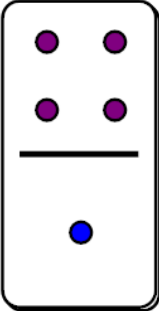
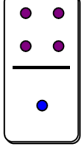

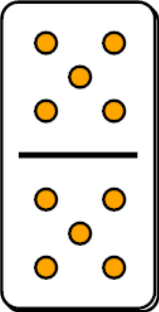
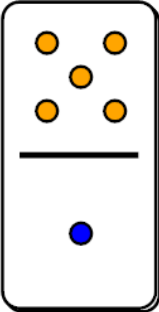
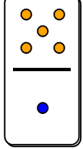
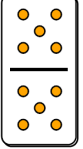
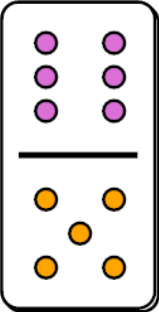
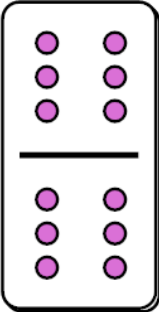
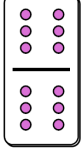
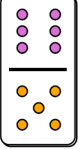
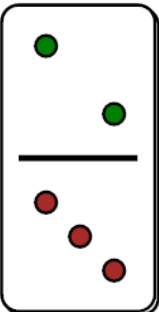
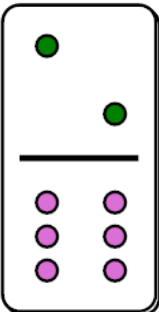
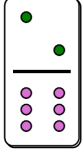
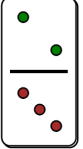
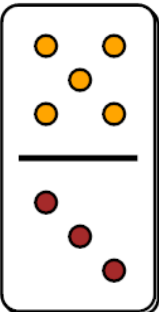
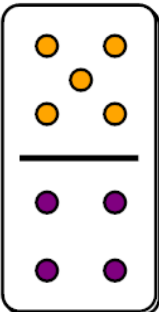
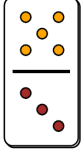


Fraction Dominoes Compare - Same Numerator Above or Below 1

1  or 	Which domino fraction would be larger?	A 	B 
2  or 	Which domino fraction would be larger?	A 	B 
3  or 	Which domino fraction would be larger?	A 	B 
4  or 	Which domino fraction would be larger?	A 	B 
5  or 	Which domino fraction would be larger?	A 	B 
6  or 	Which domino fraction would be larger?	A 	B 
7  or 	Which domino fraction would be larger?	A 	B 
8  or 	Which domino fraction would be larger?	A 	B 