


## Fraction Dominoes - To Fraction (Improper)

1



How would you write this domino fraction?

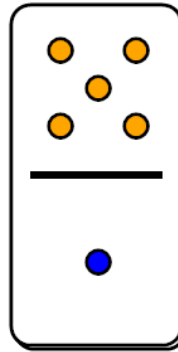
A

$$\frac{2}{4}$$

B

$$\frac{4}{2}$$

2



How would you write this domino fraction?

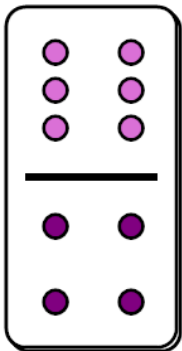
A

$$\frac{1}{5}$$

B

$$\frac{5}{1}$$

3



How would you write this domino fraction?

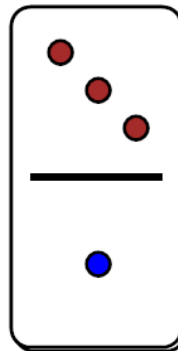
A

$$\frac{6}{4}$$

B

$$\frac{4}{6}$$

4



How would you write this domino fraction?

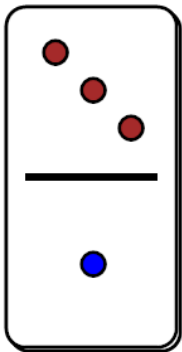
A

$$\frac{3}{1}$$

B

$$\frac{1}{3}$$

5



How would you write this domino fraction?

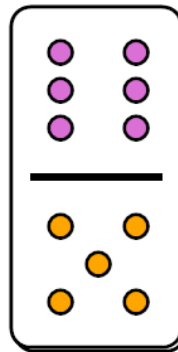
A

$$\frac{3}{1}$$

B

$$\frac{1}{3}$$

6



How would you write this domino fraction?

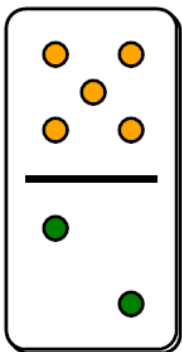
A

$$\frac{6}{5}$$

B

$$\frac{5}{6}$$

7



How would you write this domino fraction?

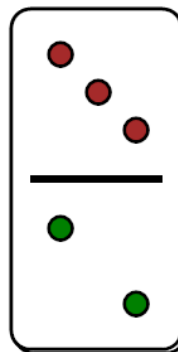
A

$$\frac{5}{2}$$

B

$$\frac{2}{5}$$

8



How would you write this domino fraction?

A

$$\frac{2}{3}$$

B

$$\frac{3}{2}$$