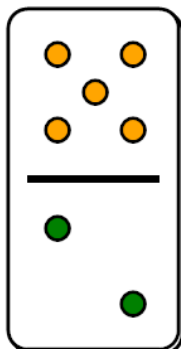




## Fraction Dominoes - To Fraction (Mixed)



1



How would you write this domino fraction?

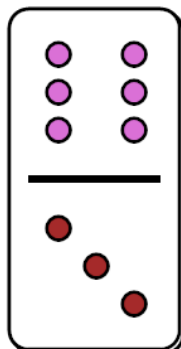
A

$$\frac{2}{5}$$

B

$$2\frac{1}{2}$$

2



How would you write this domino fraction?

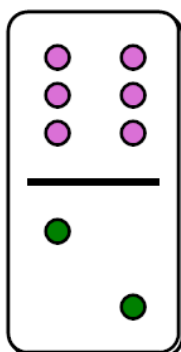
A

$$2$$

B

$$\frac{3}{6}$$

3



How would you write this domino fraction?

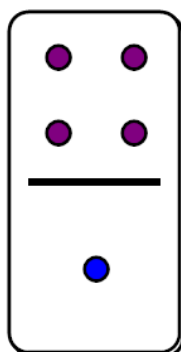
A

$$\frac{2}{6}$$

B

$$3$$

4



How would you write this domino fraction?

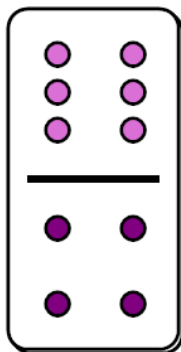
A

$$4$$

B

$$\frac{1}{4}$$

5



How would you write this domino fraction?

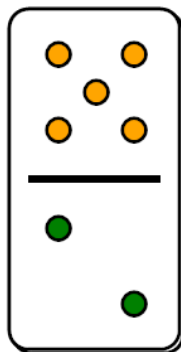
A

$$1\frac{2}{4}$$

B

$$\frac{4}{6}$$

6



How would you write this domino fraction?


A

$$2\frac{1}{2}$$

B

$$\frac{2}{5}$$

7



How would you write this domino fraction?

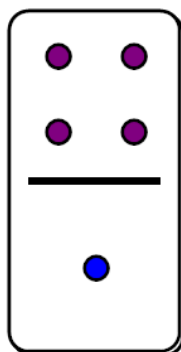
A

$$\frac{2}{4}$$

B

$$2$$

8



How would you write this domino fraction?

A

$$4$$

B

$$\frac{1}{4}$$